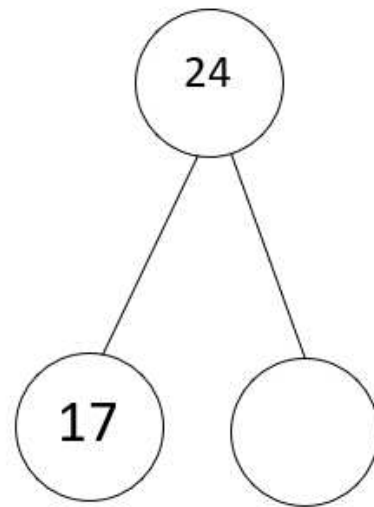
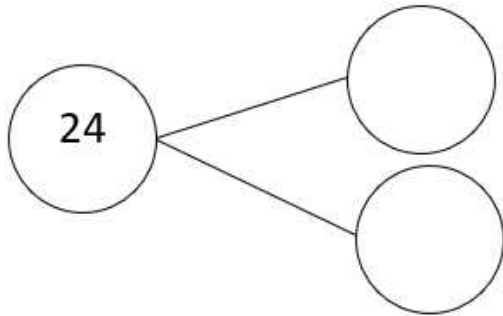
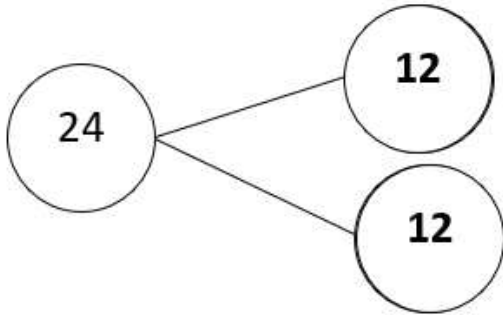


1

Complete the diagrams below showing two more ways to partition 24  
Example:



2

There are fifty marbles in a jar.  
Nigel takes 19.  
Sophie takes 23.  
How many marbles are left?



Show your working out here

marbles

3

There were 47 people on a bus.

23 people got off.

Then 18 more people got on.

How many people are on the bus now?



Show your working out here

people

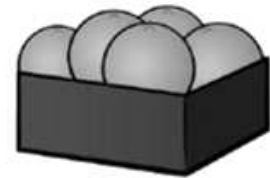
4

Des has some oranges. He packs them into boxes.

Each box holds 5 oranges.

He fills 9 boxes

How many oranges does he have in total?

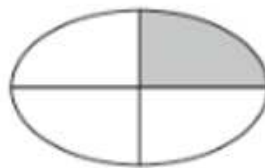
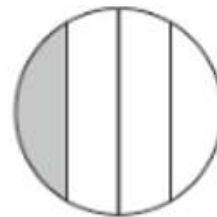


Show your working out here

oranges

5

Circle the pictures that shows  $\frac{1}{4}$  of the shape shaded



6

Sam bought a toy costing 55p  
Holly's toy cost 10p less than Sam's  
Tick the coins that Holly used



7



Card 1

Card 2

Card 3

How many white hearts will there be on Card 10?

How many hearts will there be on Card 6?