

2022 national curriculum tests

Key stage 1

MATHEMATICS

Modified large print

Paper 2: reasoning

First name

Middle name

Last name

Note for marking:

This paper should be marked using the standard mark schemes for KS1 mathematics: Paper 2. Please also refer to the Key stage 1 mathematics amendments to mark schemes – MLP document for questions that have been modified or replaced.

BLANK PAGE

In this booklet you will read the names of six children.

They are called:

Ajay

Amy

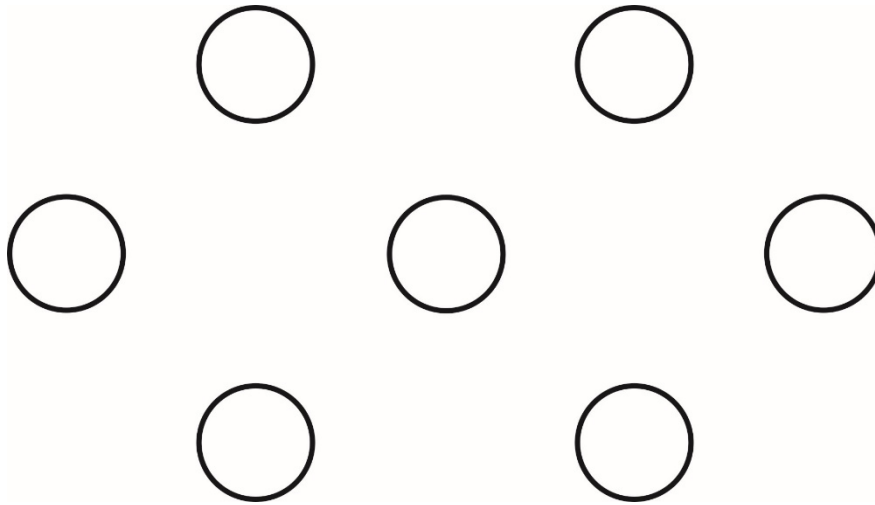
Ben

Kemi

Sam

Sita

Practice question



_____ circles

1. **Ajay 5 blue cars**

Kemi 14 red cars

_____ cars

2. **two-digit number**

less than 20

even number

3. **60**

4. **P** quarter to three

Q quarter past four

R quarter past three

S quarter to four

03 : 45

5. 12

_____ sweets

6. Look at the date below.

Tuesday 28th April 2020

The day of the month is the 28th.

Write the day of the week.

Write the year.

Write the month.

7. Look at the five numbers below.

76 84 27 45 18

Write them in order from smallest to largest.

One is done for you.

smallest	18
	<hr/>
	<hr/>
	<hr/>
	<hr/>
largest	<hr/>
	<hr/>

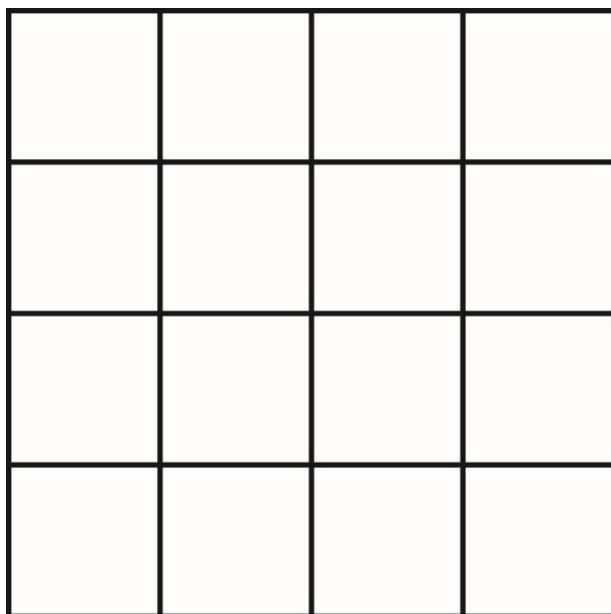
8. Kemi has **25** red beads and **6** green beads.

How many beads does Kemi have altogether?

_____ beads

9. Look at the shape below.

It is made from 16 squares.



Shade or mark a quarter of the shape.

10. Ben has **20** stickers.

Sam has **30** stickers.

Ajay has **50** stickers.

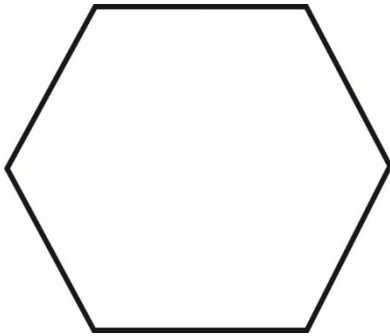
How many stickers do they have altogether?

_____ stickers


11. Look at the four shapes below.

They are labelled **P** **Q** **R** and **S**

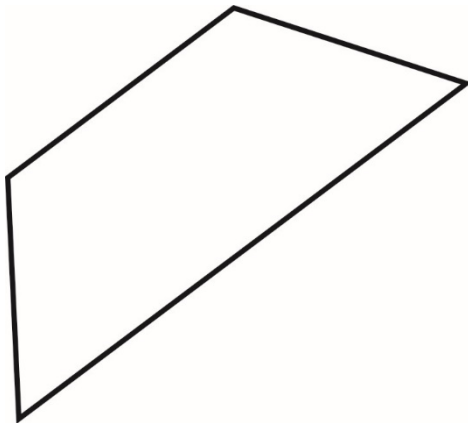
P



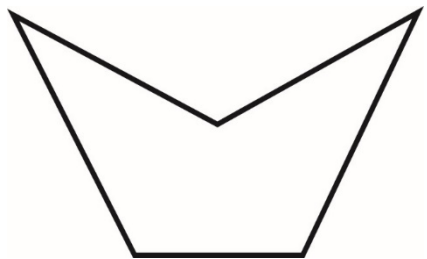
Q



R



S



Write the letter of the shape that has five sides.

12. The number sentence below equals 18

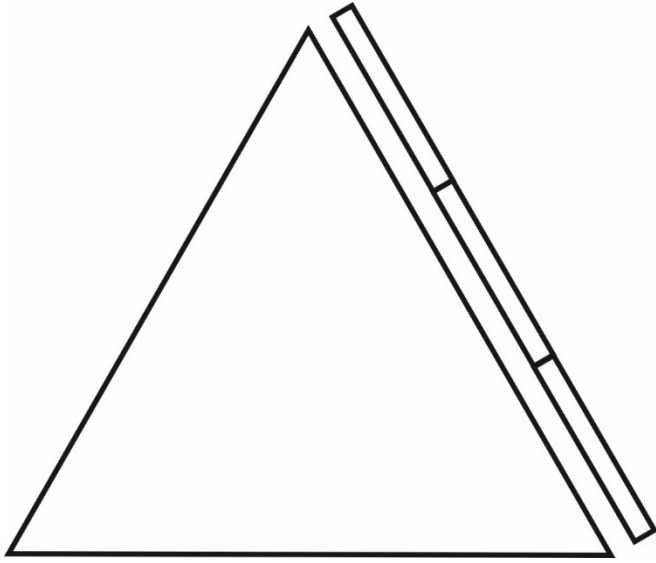
$$\boxed{1} + \boxed{1} \boxed{7} = \boxed{1} \boxed{8}$$

Now write a different number sentence that equals 18

Write one digit in each empty box.

$$\boxed{} + \boxed{1} \boxed{} = \boxed{1} \boxed{8}$$

13. Look at the diagram below.



This triangle has three sides of equal length.

Three sticks fit along one side of the triangle.

All three sticks are the same length.

How many sticks fit around all three sides of the triangle?

_____ sticks

14. Look at the number pattern below.

_____ 15 20 25 _____

Write the two missing numbers in the spaces.

Look at the number pattern below.

_____ 18 21 24 27

Write the missing number in the space.

15. Look at the list of three units below.

kg °C ml

Write the unit used to measure the mass of a bag of potatoes.

Write the unit used to measure the capacity of a cup.

Write the unit used to measure the temperature outside.

- 16. Complete the table below to show how many tens and ones are in each number.**

One is done for you.

Number	Tens	Ones
87	8	7
23		
5		

17. Look at the three numbers below.

36 42 6

Use these numbers to complete the two number sentences below.

Use all three numbers each time.

Write the numbers in the boxes.

$$\square + \square = \square$$

$$\square - \square = \square$$

18. Ben has **40** cards.

He shares them equally between **4** party bags.

How many cards does he put in each bag?

_____ cards

19. The coins in four purses are listed below.

The purses are labelled **P Q R** and **S**

P 20 p 20 p 10 p

Q 10 p 20 p 20 p 10 p

R 10 p 5 p 50 p

S 5 p 5 p 20 p 10 p 10 p

Two of the purses have the same amount of money.

Tick or mark these **two** purses.

20. Look at the four calculations below.

They are labelled **P Q R** and **S**

P $5 + 2$

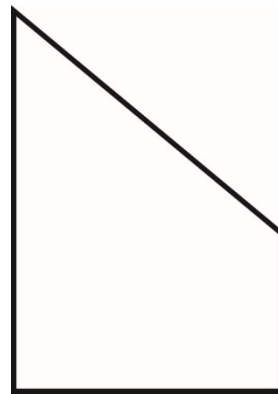
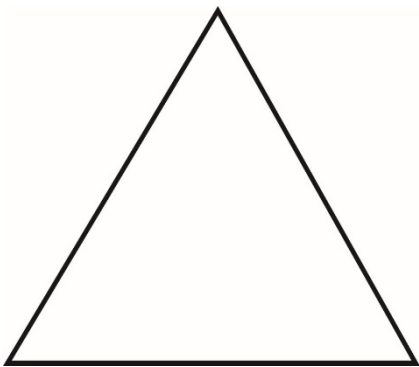

Q $10 - 3$

R $9 - 1$

S $4 + 1$

Write the letter of the calculation with the largest answer.

21. Look at the four shapes below.



Tick or mark the shape that does **not** have a line of symmetry.

22. A wall has **5** bricks in each row.



How many bricks are there in **6** rows?

_____ bricks

23. Look at the five number cards below.

20

40

50

70

90

Choose **three** of the number cards to make the subtraction below correct.

—

=

24. **8** children are eating plums.

Each child eats **2** plums.

How many plums do they eat altogether?

_____ plums

25. Sam puts 18 cards in rows.

He puts 3 cards in each row.

How many rows of cards are there?

_____ rows

26. There are **43** people on a bus.

15 people get off.

8 people get on.

How many people are on the bus now?

Show your working.

_____ people

27. Complete the number sentences below.

One is done for you.

$$\boxed{7} + 7 = 14$$

$$\boxed{} + 7 = 24$$

$$\boxed{27} + 7 = \boxed{}$$

$$\boxed{} + 7 = 44$$

Write the missing numbers in the boxes.

28. A pencil costs **15p**

A rubber costs **25p**

Kemi has **£1**

She buys a pencil and a rubber.

Write how much **change** Kemi gets from **£1**

Show your working.

_____ **p**

29. Sita has 8 grapes.

grape grape grape grape

grape grape grape grape

She eats $\frac{3}{4}$ of them.

How many does she eat?

_____ grapes

30. The table below shows the shoe sizes of all the children in a class.

Shoe size	Number of children
9	7
10	8
11	12
12	2

How many children have a shoe size of **10** or smaller?

_____ children

31. Write the missing number in the box.

$$5 \times 4 = \square$$

Write the missing number in the box.

$$\square \times 10 = 70$$

End of test

BLANK PAGE

BLANK PAGE



Standards
& Testing
Agency

Total marks	
-------------	--

2022 key stage 1 mathematics
Paper 2: reasoning

Print version code: STA/22/8408/MLp ISBN: 978-1-78957-303-9

Electronic PDF version product code: STA/22/8408/MLe ISBN: 978-1-78957-317-6

For more copies

Additional copies of this modified large print test paper can be ordered by contacting the national curriculum assessments helpline on 0300 303 3013.

© Crown copyright 2022

Re-use of Crown copyright in test materials

Subject to the exceptions listed below, these test materials are Crown copyright and you may re-use them (not including logos) free of charge in any format or medium in accordance with the terms of the Open Government Licence v3.0 which can be found on the National Archives website and accessed via the following link: www.nationalarchives.gov.uk/doc/open-government-licence. When you use this information under the Open Government Licence v3.0, you should include the following attribution: 'Contains material developed by the Standards and Testing Agency for 2022 national curriculum assessments and licensed under Open Government Licence v3.0' and where possible provide a link to the licence.



Exceptions – third-party copyright content in test materials

You must obtain permission from the relevant copyright owners, as listed in the '2022 key stage 1 tests copyright report', for re-use of any third-party copyright content which we have identified in the test materials, as listed below. Alternatively, you should remove the unlicensed third-party copyright content and/or replace it with appropriately licensed material.

Third-party content

These materials contain no third-party copyright content.

If you have any queries regarding these test materials, contact the national curriculum assessments helpline on 0300 303 3013 or email assessments@education.gov.uk.