

Ma

KEY STAGE

2

LEVELS

3–5

Mathematics

Paper 1

Calculator **not** allowed

2015

First name						
Middle name						
Last name						
Date of birth	Day		Month		Year	
School name						
DfE number						

[BLANK PAGE]

Please do not write on this page.

Instructions

You **may not** use a calculator to answer any questions in this paper.

Work as quickly and as carefully as you can.

You have **45 minutes** for this test.

If you cannot do one of the questions, **go on to the next one**.

You can come back to it later, if you have time.

If you finish before the end, **go back and check your work**.

Follow the instructions for each question carefully.



This shows where you need to put the answer.

If you need to do working out, you can use any white space on a page.

Do not write over any barcode.

Some questions have an answer box like this:



For these questions you may get a mark for showing your working.



1

Megan likes honey, but not jam.

Alfie likes honey and jam.

Chen does not like honey or jam.

Donna only likes jam.

Write the children's names in the correct parts of the sorting diagram.



	likes honey	does not like honey
likes jam		
does not like jam		

1i

1ii

2 marks

2

Circle the number closest to 500



525

491

511

408

550

 ²
1 mark

3

Calculate **735 + 2669**



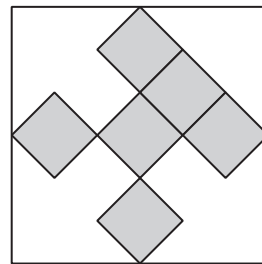
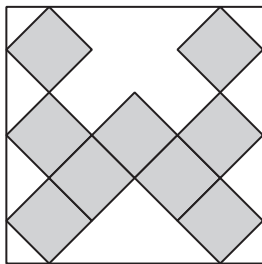
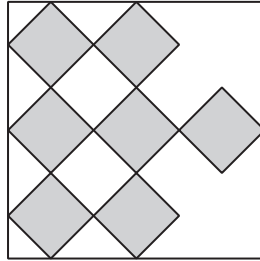
 ³
1 mark

4

These three square tiles have symmetrical patterns on them.

Draw the line of symmetry on each tile.

Use a ruler.



4i

4ii

2 marks

5

Liam hires a bike.

He has to return it by 3 pm.

The time is 2:25 pm.



How many minutes has he got left?



5a

1 mark

Amy hires a bike for 45 minutes.

She takes the bike out at 3:30 pm.

At what time must she return the bike?



5b

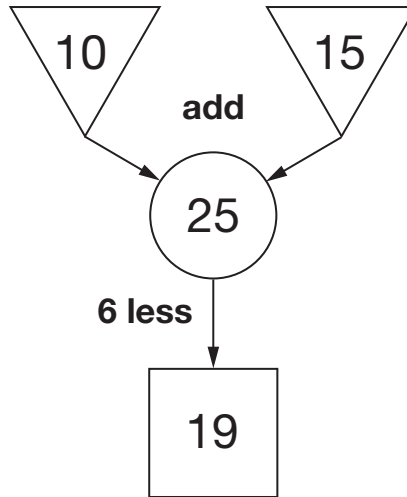
1 mark



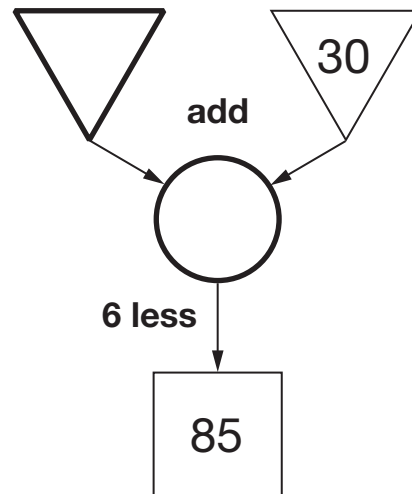
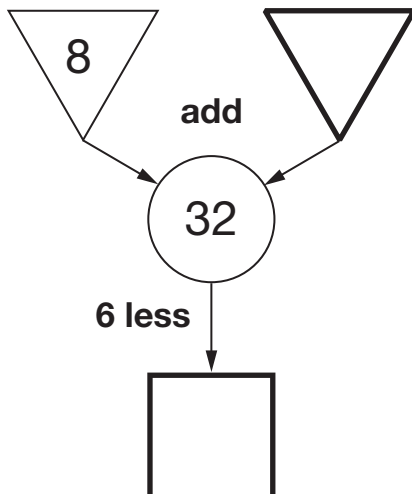
6

In this diagram, the numbers in the triangles add together to make the number in the circle.

The number in the square is 6 less than the number in the circle.



Write the four missing numbers in these diagrams.



6a

1 mark

6b

1 mark



7

The numbers in this sequence increase by 30 each time.

20 50 80 110 ...

The sequence continues in the same way.

Which number in the sequence will be **closest to 300**?



Show
your
working

7i

7ii

2 marks

8

Write the missing numbers.



$$150 - \boxed{} = 87$$

8a

1 mark

$$90 \times \boxed{} = 450$$

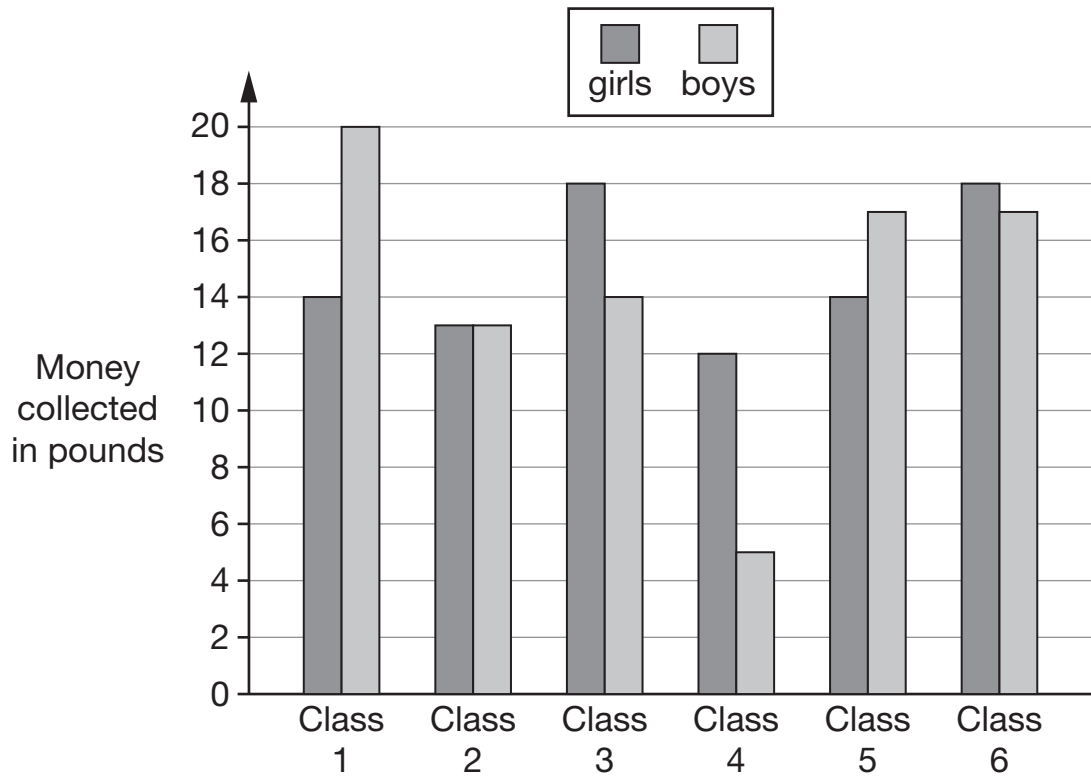
8b

1 mark

9

Six classes at Winward Primary School collected some money.

The chart shows how much money the boys and girls collected.



In Class 4, how much more money did the girls collect than the boys?



9a

1 mark

How many classes collected more than £30?



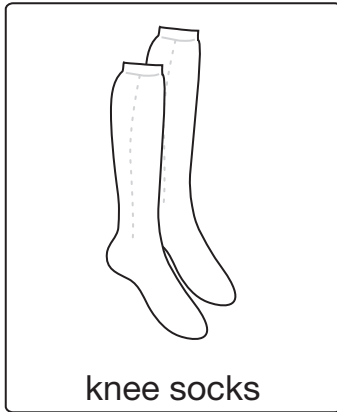
9b

1 mark

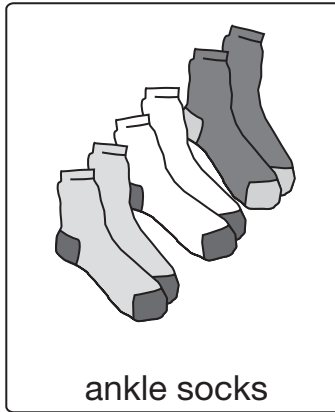


10

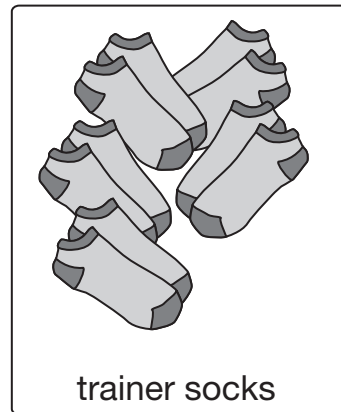
A shop sells pairs of socks.



1 pair for £5.45



3 pairs for £7.50



5 pairs for £8.50

Kirsty buys 1 pair of knee socks and 3 pairs of ankle socks.

She pays with a £20 note.

How much change does she get?

Show your working

10ai

10aii

2 marks

Amy spends £25.50 on trainer socks.

How many **pairs** of trainer socks does she get?

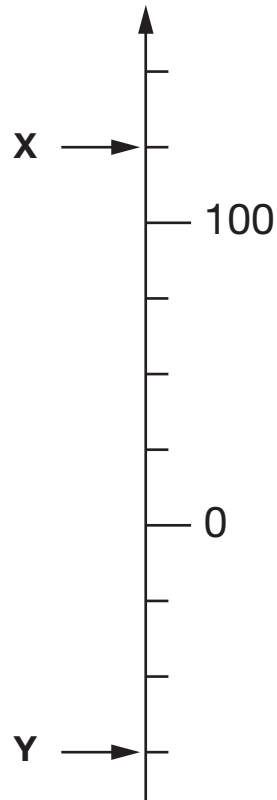
pairs

10b

1 mark

11

Here is part of a number line.



What is the value of **X**?



X =

11a

1 mark

What is the value of **Y**?

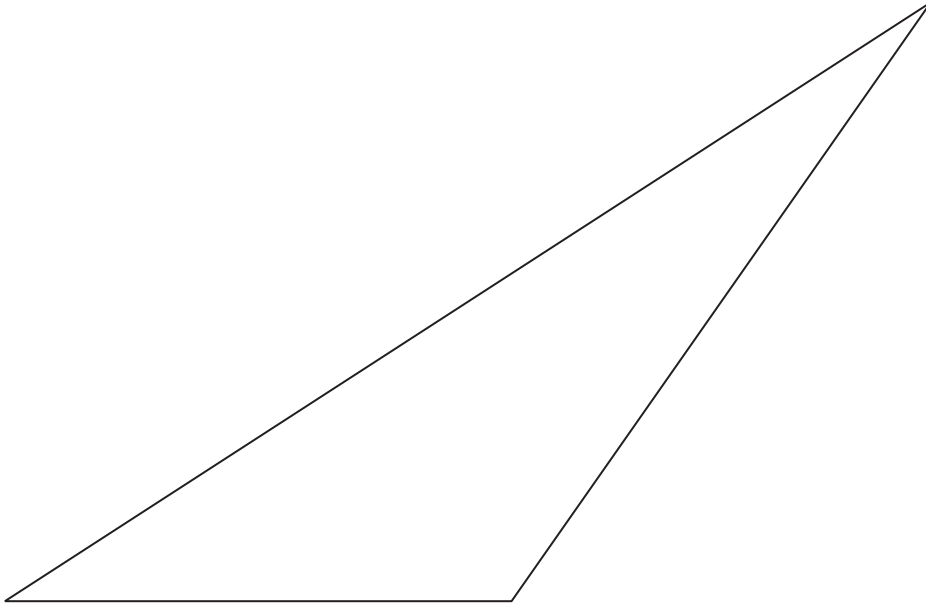


Y =

11b

1 mark





Measure the length of the shortest side of this triangle in millimetres.



12a

1 mark

Measure the size of the largest angle in this triangle.



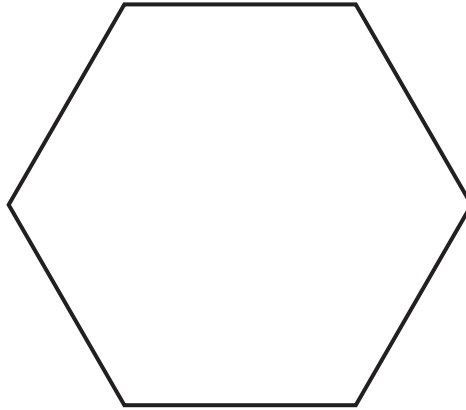
12b

1 mark

13

Here is a hexagon.

Draw **two** straight lines across the hexagon to make two triangles and two quadrilaterals.



13

1 mark

14

Calculate 16.72×5




14

1 mark



15

Write the two missing digits.



$$\boxed{} \boxed{1} - \boxed{2} \boxed{} = 34$$

15

1 mark

16

Liam has five coins.

Three of the coins add up to **30p**.Three of the coins add up to **40p**.All five coins add up to **£1**

What are the coins that Liam has?



p	p	p	p	p
---	---	---	---	---

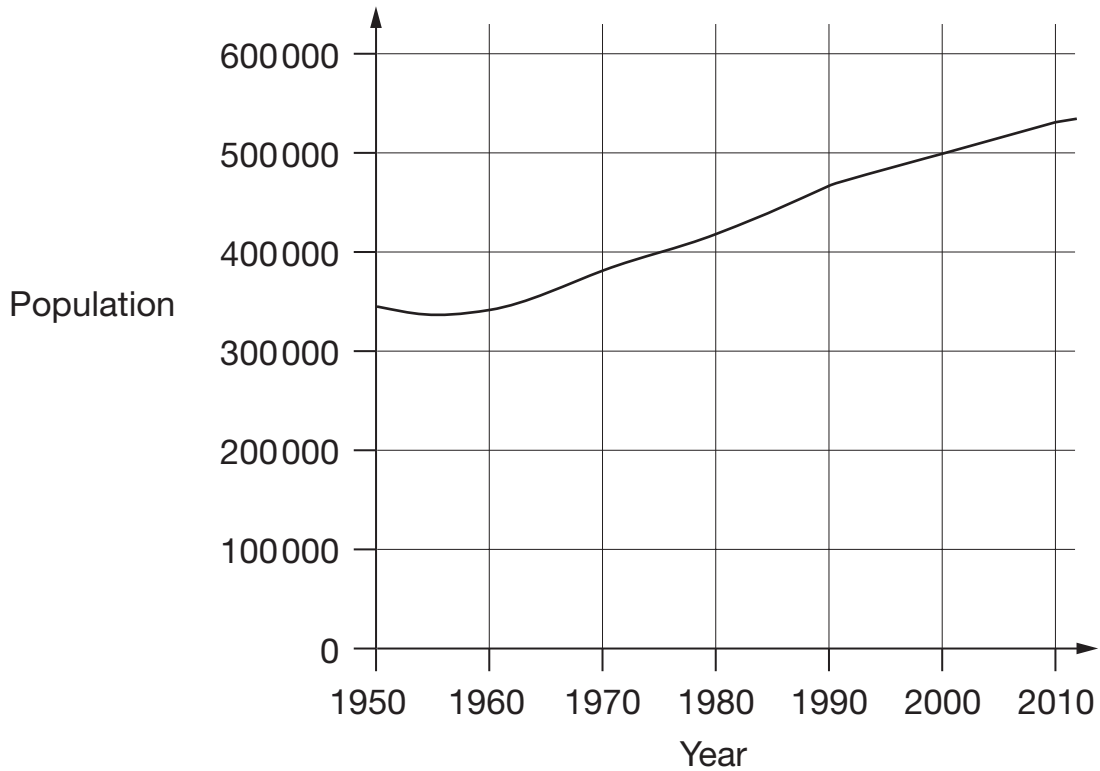
16

1 mark



17

This chart shows the population of Cornwall from 1950 to 2010.



Look at the chart.

In which year did the population first reach 400 000?



17a

1 mark

How much did the population increase from 1950 to 2000?



17b

1 mark

What was the population of Cornwall in 2010?



17c

1 mark



18

Calculate **55%** of **640**




18

1 mark

19

This is Kirsty's recipe for breakfast cereal.

- 50 grams of oats
- 30 grams of raisins
- 40 grams of nuts



If she uses 125 grams of oats, how many grams of raisins does she need?



Show
your
working

 g

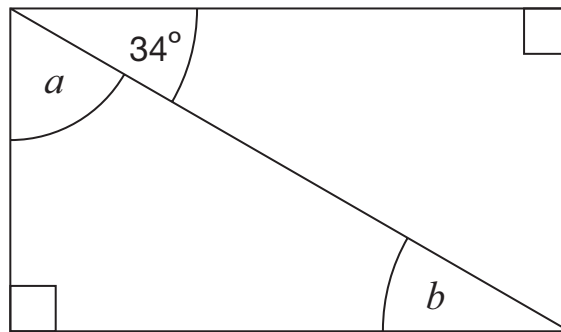
19i

19ii

2 marks

20

Here is a rectangle.



Not to scale

Calculate the size of angles a and b .

Do not measure the angles.

 $a =$

20a

1 mark

$b =$

20b

1 mark

21

The **difference** between two numbers is 2

When each number is rounded to the nearest hundred,
the difference between them is 100

Write what the two numbers could be.



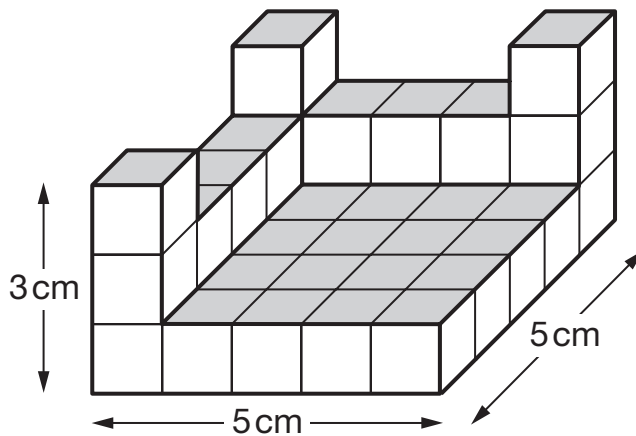
and

21

1 mark

22

This shape is made of wooden centimetre cubes.



**Not
actual
size**

How many **more** centimetre cubes are needed to make it into
a solid cuboid 3 cm tall, 5 cm long and 5 cm wide?



22

1 mark

Alfie says,



'When you multiply two numbers together, the answer is always greater than either of the numbers you started with.'

Is Alfie correct?
Circle **Yes** or **No**.



Yes / No

Explain how you know.



23


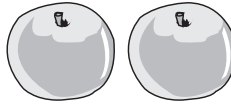
1 mark



A shop sells fruit.

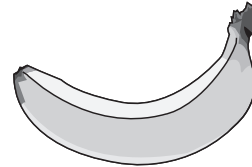
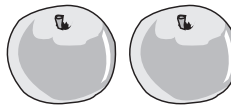
Chen buys 2 apples and 3 bananas.

He pays £2.35



Megan buys 2 apples and 1 banana.

She pays £1.25



How much does **one** banana cost?



Show
your
working

24i

24ii

2 marks

[END OF TEST]

Please do not write on this page.





Standards
& Testing
Agency

2015 key stage 2 levels 3–5 mathematics test: paper 1 - calculator not allowed
Print version product code: STA/15/7213/p ISBN: 978-1-78315-415-9
Electronic PDF version product code: STA/15/7213/e ISBN: 978-1-78315-443-2

For more copies

Additional printed copies of this booklet are not available. It can be downloaded from www.gov.uk/government/publications from Tuesday 7 July.

© Crown copyright and Crown information 2015

Re-use of Crown copyright and Crown information in test materials

Subject to the exceptions listed below, the test materials on this website are Crown copyright or Crown information and you may re-use them (not including logos) free of charge in any format or medium in accordance with the terms of the Open Government Licence v3.0 which can be found on the National Archives website and accessed via the following link: www.nationalarchives.gov.uk/doc/open-government-licence. When you use this information under the Open Government Licence v3.0, you should include the following attribution: "Contains public sector information licensed under the Open Government Licence v3.0" and where possible provide a link to the licence.



Exceptions - third party copyright content in test materials

You must obtain permission from the relevant copyright owners, as listed in the '2015 key stage 2 test materials copyright report', for re-use of any third party copyright content which we have identified in the test materials, as listed below. Alternatively you should remove the unlicensed third party copyright content and/or replace it with appropriately licensed material.

Third party content

Image of oats, raisins and nuts (page 18, question 19) © Pearson Education Ltd.

If you have any queries regarding these test materials contact the national curriculum assessments helpline on 0300 303 3013 or email assessments@education.gov.uk.

