

Key stage 2

Mathematics

Paper 3: reasoning

First name						
Middle name						
Last name						
Date of birth	Day		Month		Year	
School name						
DfE number						



[BLANK PAGE]

Please do not write on this page.



Instructions

You **must not** use a calculator to answer any questions in this test.

Questions and answers

You have **40 minutes** to complete this test.

Follow the instructions for each question.

Work as quickly and as carefully as you can.

If you need to do working out, you can use the space around the question.

Do not write over any barcodes.

Some questions have a method box like this:

Show your method

For these questions, you may get a mark for showing your method.

If you cannot do a question, **go on to the next one.**

You can come back to it later, if you have time.

If you finish before the end, **go back and check your work.**

Marks

The number under each line at the side of the page tells you the number of marks available for each question.



1

Circle the numbers that have **8** in the thousands place.

84,623

28,436

683,052

8,325

608,231

1 mark

2

Tick **all** the numbers that are less than one million and fifty thousand.

1,400,000

☐

1,049,900

☐

1,060,000

☐

1,030,900

☐

1 mark



3

There were 15,961 people at a football game.

Round this number to the nearest hundred.

1 mark

4

Jack buys 2 kilograms of pears.

He spends £3.28

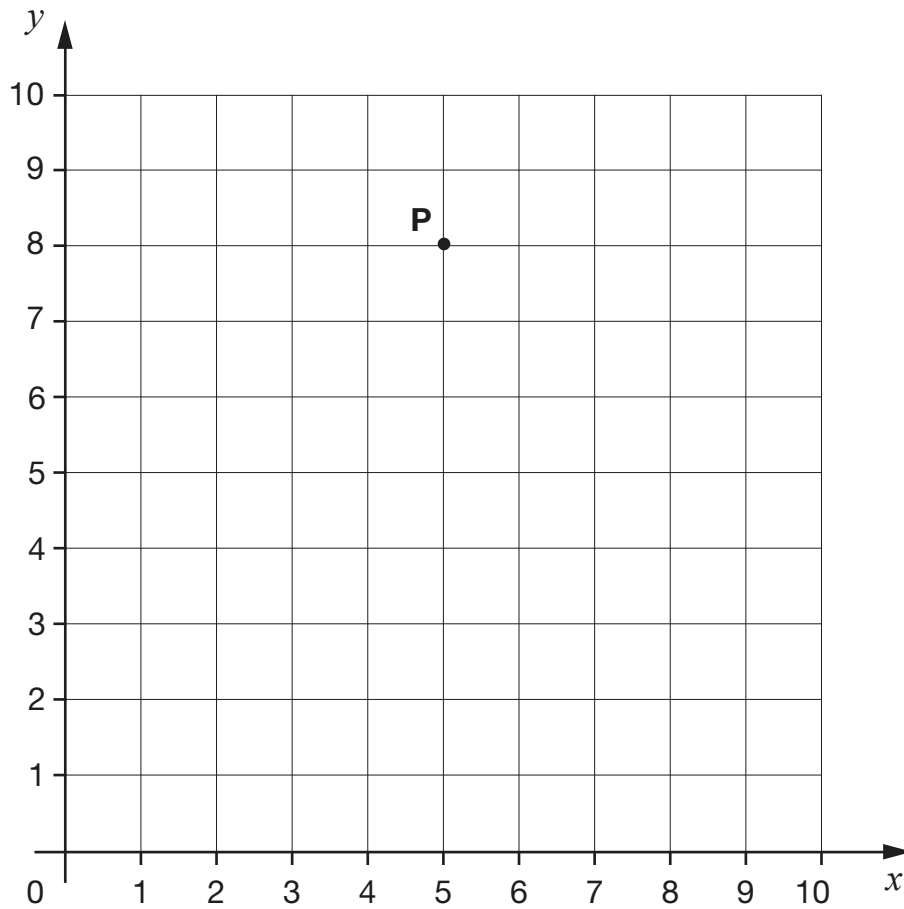
What is the cost of **one** kilogram of pears?

1 mark



5

Point **P** is located at (5, 8) on the grid.



Point **P** is translated 4 units right, 6 units down and 2 units left.

What is the location of point **P** after the three translations?

(,)

1 mark

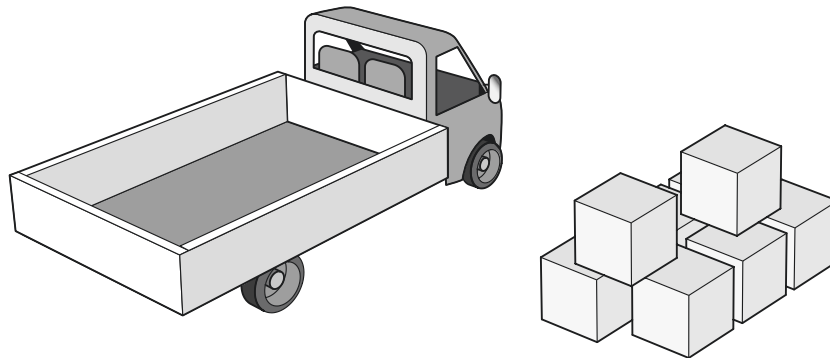


6

The mass of the empty truck is 2,250 kilograms.

It is then loaded with 8 boxes.

The mass of each box is 25 kilograms.



What is the **total** mass of the truck and its load?

Show your method

kilograms

2 marks



7

Draw **four lines** to match each improper fraction to its equivalent mixed number.

$$\frac{26}{4}$$

$$\frac{27}{5}$$

$$\frac{30}{4}$$

$$\frac{32}{5}$$

$$5\frac{2}{5}$$

$$4\frac{2}{5}$$

$$6\frac{2}{4}$$

$$4\frac{2}{4}$$

$$7\frac{2}{4}$$

$$6\frac{2}{5}$$

2 marks




8

Ken buys these three items.



80p



£2.50



£1.15

He pays with a £20 note.

How much **change** does Ken get?

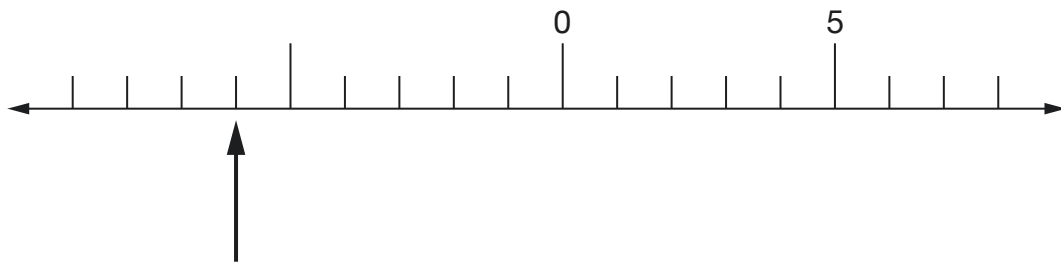
Show
your
method

2 marks



9

Here is part of a number line.



Write the number that the arrow is pointing to.

1 mark

Write the number that is 16 **less than** 7

1 mark



10

Here is some information about four animals in a zoo.

	Elephant	Hippo	Rhino	Giraffe
Mass	6,300kg	1,100kg	2,400kg	1,200kg
Height	3.4m	1.5m	1.7m	6.0m

Tick the statements that are **true**.

The elephant is exactly **three times** heavier than the rhino.

☐

The hippo is a **quarter** of the height of the giraffe.

☐

The rhino is **20cm** taller than the hippo.

☐

The tallest animal is also the heaviest.

☐

2 marks



Tick the number sentence that is correct.

Tick **one**.

$$0.304 = \frac{4}{10} + \frac{3}{1000} \quad \square$$

$$0.43 = \frac{43}{1000} \quad \square$$

$$0.403 = \frac{4}{10} + \frac{3}{1000} \quad \square$$

$$0.034 = \frac{3}{10} + \frac{4}{1000} \quad \square$$

1 mark

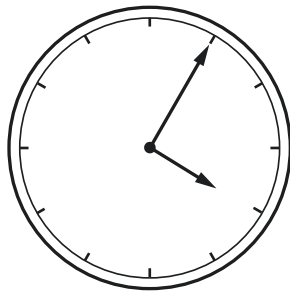


12

Each clock below shows the time in **am** or **pm**.

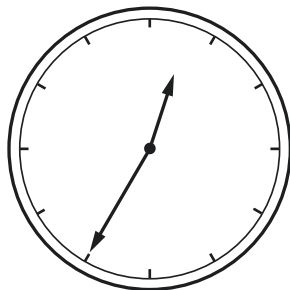
Match each clock to its 24-hour time.

One has been done for you.



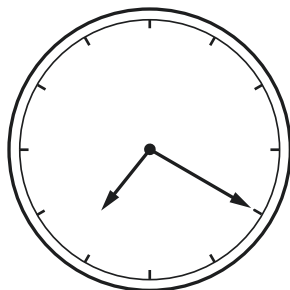
am

12:35



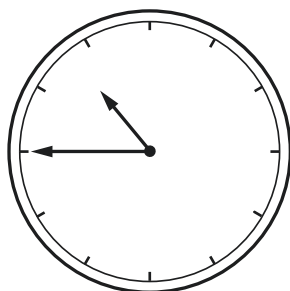
pm

04:05



am

22:45



pm

19:20

21:45

1 mark



13

Write these numbers in order, starting with the **least**.

$$\frac{9}{100}$$

0.999

$$\frac{99}{100}$$

0.009

least1 mark

14

Look at this expression.

$$y + 4$$

Tick the value for y that gives a **prime** number value for $y + 4$

$$y = 8$$

$$y = 9$$

$$y = 10$$

1 mark

Tick the value for y that gives a **square** number value for $y + 4$

$$y = 5$$

$$y = 6$$

$$y = 7$$

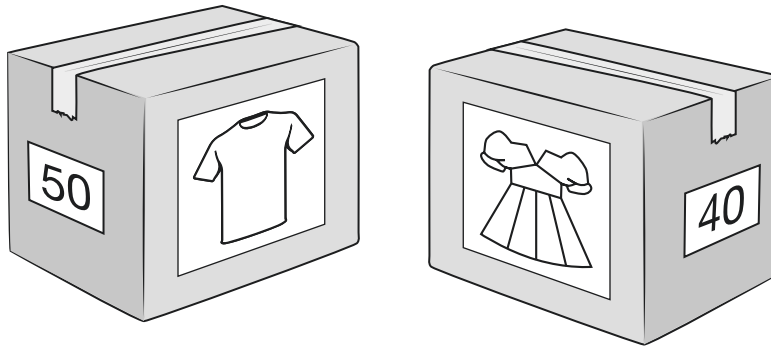
1 mark



15

A factory makes T-shirts and dresses.

They pack them in boxes.



There are **50** T-shirts in a box.

How many T-shirts are there in **250** boxes?

1 mark

There are **40** dresses in a box.

How many boxes are needed for **3,000** dresses?

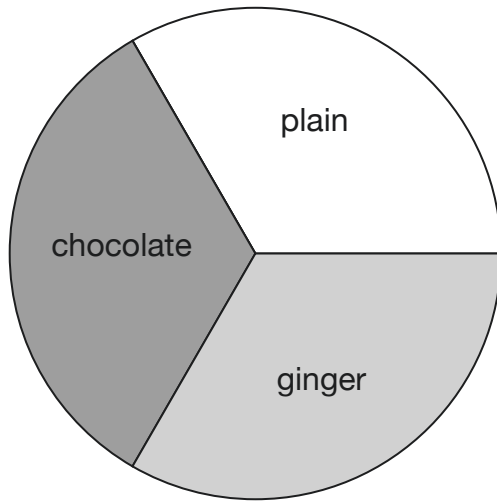
1 mark



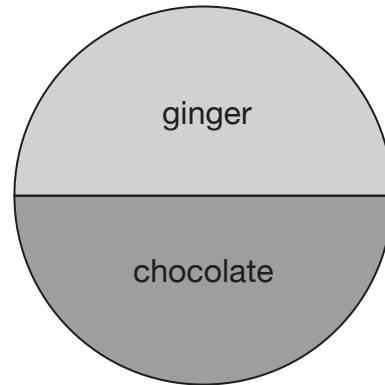
16

These pie charts show the biscuits in two tins.

Tin **A** has **36** biscuits.



Tin **B** has **20** biscuits.



Tin **B** has more chocolate biscuits than Tin **A**.

Explain why this is **incorrect**.


1 mark



17

A shop buys **35 boxes** of crisps.

Each box contains **48 packets** of crisps.



On average, the shop sells **56 packets** of crisps each day.

How many **days** will it take for all of the crisps to be sold?

Show
your
method

days

3 marks



18

Convert **5.65 km** to metres.

1 mark

Convert **35.5 cm** to metres.

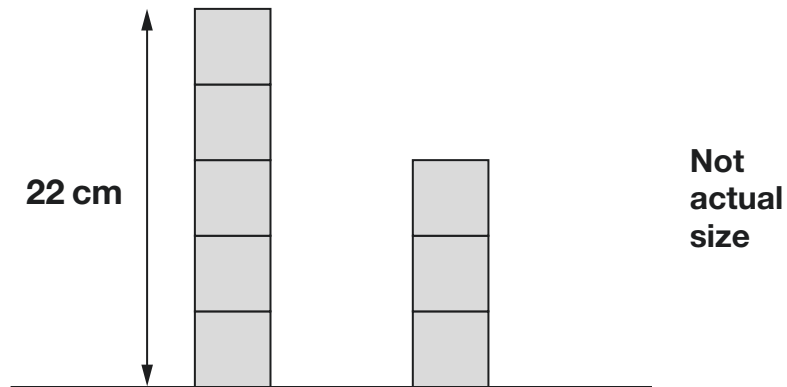
1 mark



19

Jacob has some wooden blocks that are all the same size.

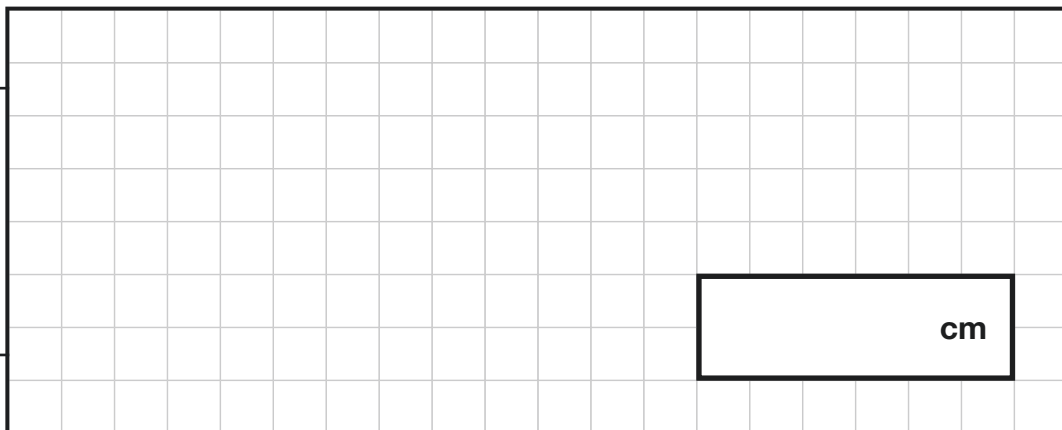
He uses the blocks to make two towers.



The height of the taller tower is 22 centimetres.

What is the height of the smaller tower?

Show
your
method

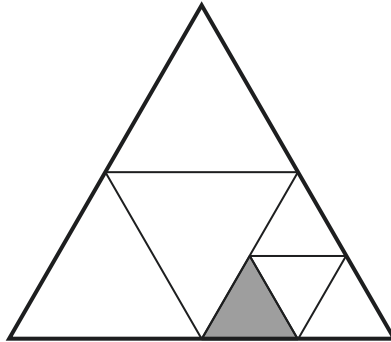


2 marks



20

This shape is made from equilateral triangles.



What fraction of the **whole** shape is shaded?

1 mark

21

Here is some information about a number:

- It has two digits
- It is a multiple of 7
- One of the digits is 8

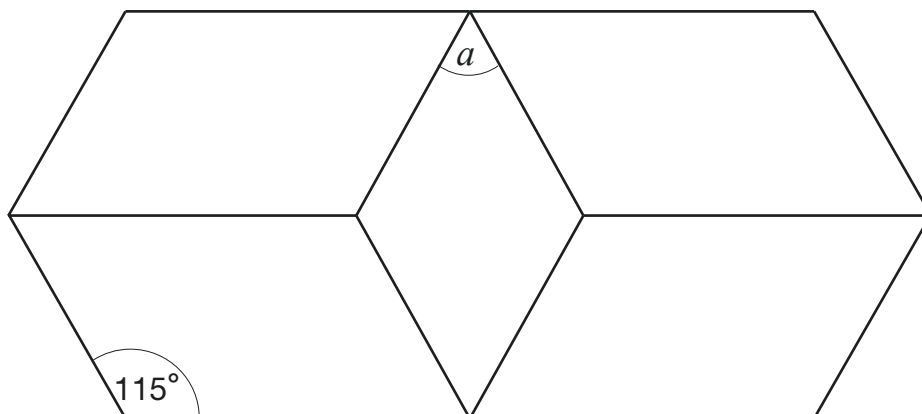
Write **all** the possible numbers that the number could be.

2 marks



22

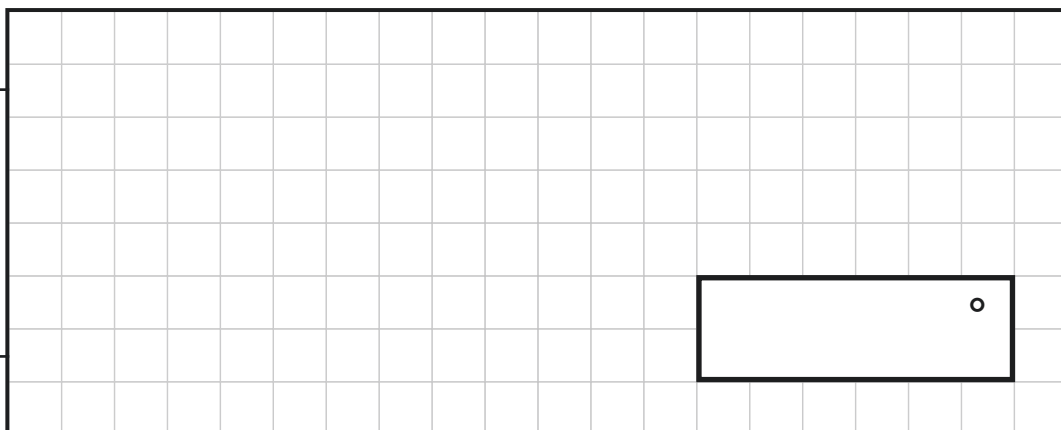
This diagram shows four identical parallelograms and a rhombus.



Not to scale

Calculate the size of angle a .

Show
your
method



2 marks



[END OF TEST]

Please do not write on this page.





Standards
& Testing
Agency

Key stage 2 mathematics Paper 3: reasoning

Print version product code: STA/25/8919/p ISBN: 978-1-83507-250-9

Electronic PDF version product code: STA/25/8919/e ISBN: 978-1-83507-271-4

For more copies

Additional printed copies of this booklet are not available. It can be downloaded after the test window from www.gov.uk/government/collections/national-curriculum-assessments-practice-materials.

© Crown copyright

The materials in this booklet are Crown copyright. You may re-use them (not including logos) free of charge in any format or medium in accordance with the terms of the Open Government Licence v3.0, which can be found on the National Archives website and accessed via the following link: www.nationalarchives.gov.uk/doc/open-government-licence.



If you have any queries regarding these test materials, please contact the national curriculum assessments helpline on 0300 303 3013 or email assessments@education.gov.uk.

