



Key stage 3 mathematics 2005
Mental mathematics Test C

First name _____

Last name _____

School _____

Total marks

Time: 5 seconds continued

6		°	<input style="width: 20px; height: 20px;" type="text"/>
----------	--	---	---

7		$\frac{3}{9}$	<input style="width: 20px; height: 20px;" type="text"/>
----------	--	---------------	---

8		$3m + m$	<input style="width: 20px; height: 20px;" type="text"/>
----------	--	----------	---

Time: 10 seconds

9	£	50p	<input style="width: 20px; height: 20px;" type="text"/>
----------	---	-----	---

10		25 28	<input style="width: 20px; height: 20px;" type="text"/>
-----------	--	-------	---

11		10:30 am	<input style="width: 20px; height: 20px;" type="text"/>
-----------	--	----------	---

12	125, 115, 105,		<input style="width: 20px; height: 20px;" type="text"/>
-----------	----------------------	--	---

13			<input style="width: 20px; height: 20px;" type="text"/>
-----------	--	--	---

14	-1°C	5°C	-3°C	<input style="width: 20px; height: 20px;" type="text"/>
	2°C	0°C		<input style="width: 20px; height: 20px;" type="text"/>

15		<input style="width: 20px; height: 20px;" type="text"/>
-----------	--	---

Practice question

		90	
--	--	----	--

Time: 5 seconds

1		<input style="width: 20px; height: 20px;" type="text"/>
----------	--	---

2		<input style="width: 20px; height: 20px;" type="text"/>
----------	--	---

3		$b = 14 + a$	<input style="width: 20px; height: 20px;" type="text"/>
----------	--	--------------	---

4		<input style="width: 20px; height: 20px;" type="text"/>
----------	--	---

5		9300	<input style="width: 20px; height: 20px;" type="text"/>
----------	--	------	---

Time: 10 seconds continued

16

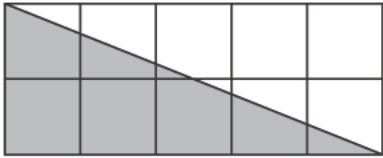
17 £ 80p

18 seconds

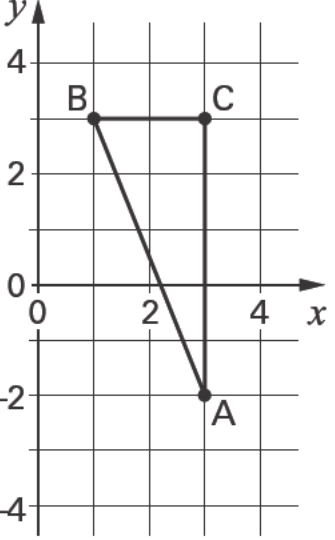
19 2000 992

20 3, 8, 3, 1, 4

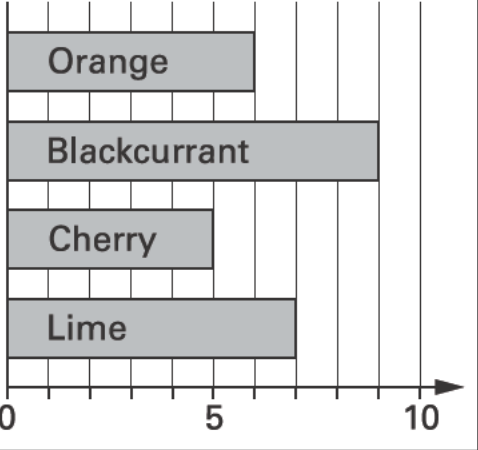
21 °C -2°C

22 
cm²

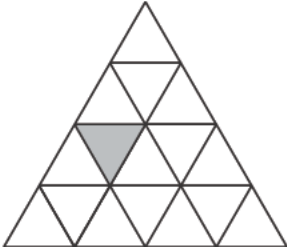
23 £ £60

24 
(,)

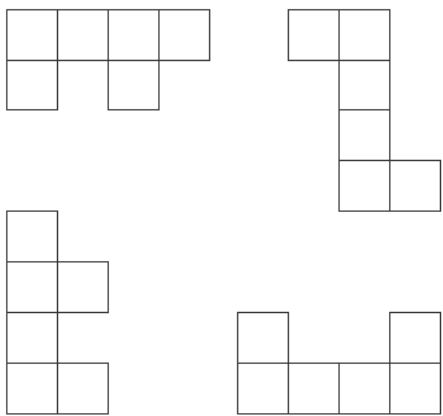
Time: 15 seconds

25 

26 W

27 

28 and

29 

30 25 cards
16 even numbers