

Ma

KEY STAGE

3

LOWER TIER
TEST C

2005

Mental mathematics Test C Audiotape/CD transcript

This booklet contains a transcript of the key stage 3 mental mathematics Test C. It should be used **ONLY** in cases of recording malfunction or for specific special arrangements made for the administration of this version of the test for pupils with sensory and/or motor disabilities. The practice question for the mental mathematics test is included within the subject-specific guidance.

2005



department for

education and skills

creating opportunity, releasing potential, achieving excellence

Sourced from SATs-Papers.co.uk

<https://www.SATs-Papers.co.uk>

'Now we are ready to start the test.'

For the first group of questions you will have 5 seconds to work out each answer and write it down.'

1	Write in figures the number five hundred and eight.
2	What do you need to add to eighty-three to make one hundred?
3	Look at the equation on your answer sheet. When a equals seven, what is the value of b ?
4	What number multiplied by eight equals forty-eight?
5	Look at the number on your answer sheet. Divide it by one hundred.
6	What is the sum of the angles in a triangle?
7	Write the fraction on your answer sheet in its simplest form.
8	Look at the expression on your answer sheet. Write it as simply as possible.

'For the next group of questions you will have 10 seconds to work out each answer and write it down.'

9	I buy a notebook for fifty pence. How much change should I get from a two pound coin?
10	Look at the numbers on your answer sheet. Add them.
11	A train leaves at ten thirty am and travels for four hours. At what time does the train stop? Write your answer using am or pm.
12	I am counting back in steps of ten. One hundred and twenty-five, one hundred and fifteen, one hundred and five, ... Write down the next number.
13	What is half of seven?
14	Look at the temperatures on your answer sheet. Put a ring round the temperature that is the lowest.
15	Six hundred people went on holiday. The pie chart shows how they travelled. How many people travelled by car?

'Now turn over your answer sheet.'

Key stage 3 mathematics 2005
Mental mathematics Test C

First name _____

Last name _____

School _____

Total marks

Time: 5 seconds continued

6 °

7 $\frac{3}{9}$

8 $3m + m$

Time: 10 seconds

9 £ 50p

10 25 28

11 10:30 am

12 125, 115, 105,

13

Practice question

90

Time: 5 seconds

1

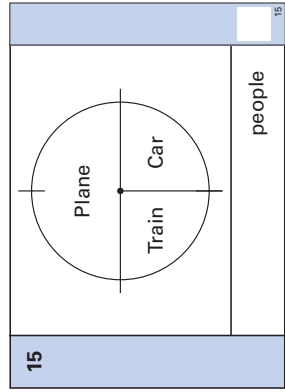
2

3 $b = 14 + a$

4

5 9300

14 -1°C 2°C 5°C 0°C -3°C

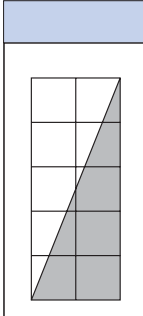
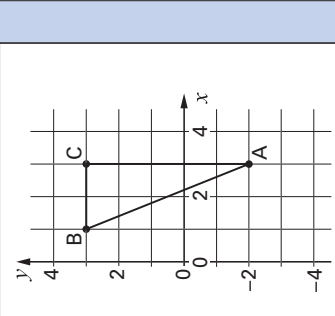
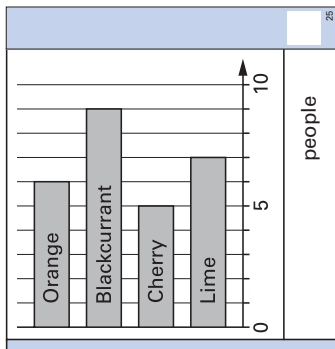
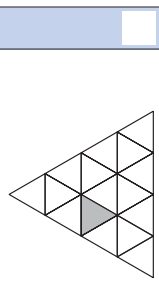
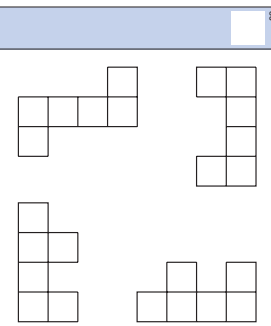


16	Write down an even number that is a multiple of seven.
17	Two rulers cost eighty pence. How much do three rulers cost?
18	How many seconds are there in one and a half minutes?
19	There were two thousand people at a concert. Nine hundred and ninety-two of them were women. How many of the people were not women?
20	Look at the numbers on your answer sheet. Work out their range.
21	The temperature was minus two degrees Celsius. At night the temperature fell by seven degrees. What was the temperature at night?
22	Look at the shaded triangle drawn on a centimetre square grid. What is the area of this triangle?
23	What is twenty per cent of sixty pounds?
24	Look at the triangle on the grid. Write the coordinates of the point marked A.

'For the next group of questions you will have 15 seconds to work out each answer and write it down.'

25	People at a shopping centre voted for their favourite fruit drink. The bar chart shows the results. Altogether, how many people voted?
26	I face west, then I turn through two right angles. What direction am I facing now?
27	Look at the shape made from small equilateral triangles. Shade two more triangles so that the shape has three lines of symmetry.
28	I am thinking of two numbers that add to ten. The two numbers multiply together to make twenty-one. What are my two numbers?
29	Which one of the shapes on your answer sheet is the net of a cube? Put a tick inside the correct shape.
30	I have twenty-five cards. Sixteen of them show even numbers and the rest show odd numbers. I am going to take a card at random. What is the probability that the card will show an odd number?

'Put your pens down. The test is finished.'

<p>Time: 10 seconds continued</p> <p>16 <input type="text"/></p> <p>17 £ 80p</p> <p>18 <input type="text"/> seconds</p> <p>19 <input type="text"/> 2000 992</p> <p>20 <input type="text"/> 3, 8, 3, 1, 4</p> <p>21 <input type="text"/> °C <input type="text"/> -2°C</p> <p>22  <input type="text"/> cm²</p> <p>23 £ <input type="text"/> £60</p> <p>24  <input type="text"/> (,)</p>	<p>Time: 15 seconds</p> <p>25  <input type="text"/></p> <p>26 <input type="text"/> <input type="text"/> W <input type="text"/></p> <p>27  <input type="text"/></p> <p>28 <input type="text"/> and <input type="text"/></p> <p>29  <input type="text"/></p> <p>30 <input type="text"/> 25 cards <input type="text"/> 16 even numbers <input type="text"/></p>
---	---

First published in 2005

© Qualifications and Curriculum Authority 2005

Reproduction, storage, adaptation or translation, in any form or by any means, of this publication is prohibited without prior written permission of the publisher, unless within the terms of licences issued by the Copyright Licensing Agency. Excerpts may be reproduced for the purpose of research, private study, criticism or review, or by educational institutions solely for educational purposes, without permission, provided full acknowledgement is given.

Produced in Great Britain by the Qualifications and Curriculum Authority under the authority and superintendence of the Controller of Her Majesty's Stationery Office and Queen's Printer of Acts of Parliament.

The Qualifications and Curriculum Authority is an exempt charity under Schedule 2 of the Charities Act 1993.

Qualifications and Curriculum Authority
83 Piccadilly
London
W1J 8QA
www.qca.org.uk/

Further teacher packs may be purchased (for any purpose other than statutory assessment) by contacting:

QCA Orderline, PO Box 29, Norwich NR3 1GN
tel: 08700 606015; fax: 08700 606017