

Key stage 3 mathematics 2006

Mental mathematics Test C

First name _____

Last name _____

School _____

Total marks

Practice question

		25	
--	--	----	--

Time: 5 seconds

1		
---	--	--

2		
---	--	--

3		
---	--	--

4	feet	151 feet
---	------	----------

5		33
---	--	----

6	seconds	
---	---------	--

7		920
---	--	-----

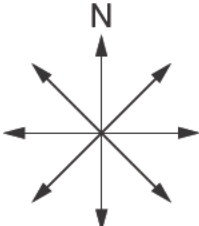
Time: 5 seconds continued

8		-7	
---	--	----	--

9		$3d - d$	
---	--	----------	--

Time: 10 seconds

10	pupils	£24	£6
----	--------	-----	----

11			
----	---	--	--

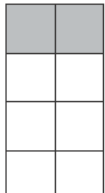
12		24	50
----	--	----	----

13	£	£11	
----	---	-----	--

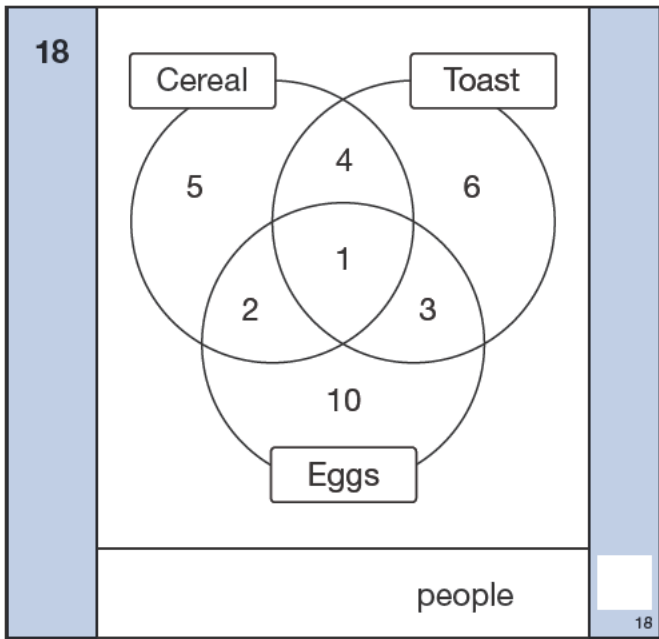
14		$16 + x = 23$	
----	--	---------------	--

15		3.7	0.5
----	--	-----	-----

16		5	8	5
		5	8	7
	_____	5	6	6

17	_____ %		

Time: 10 seconds continued



19

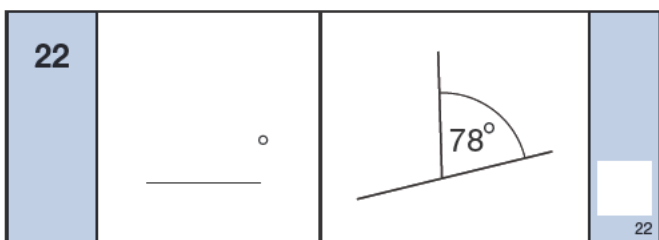
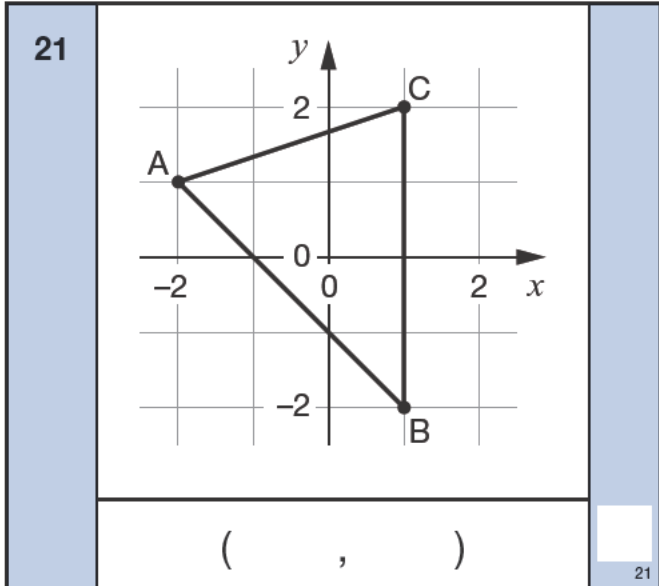
	9	12	
--	---	----	--

19

20

--	--	--

20

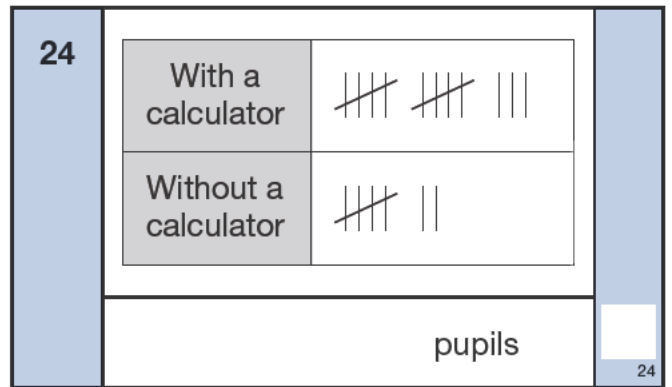


23

	7	
--	---	--

23

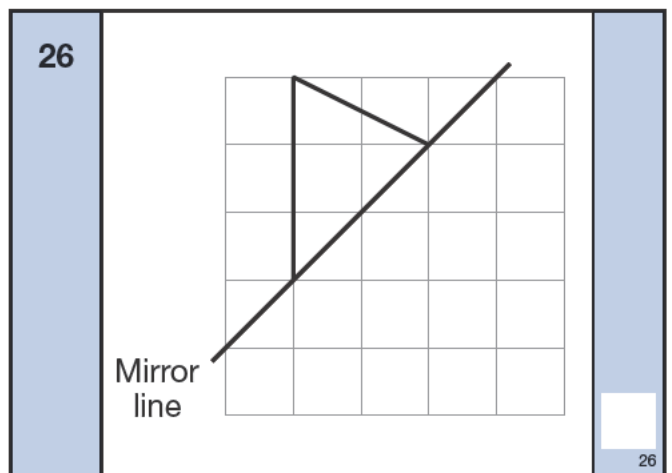
Time: 15 seconds



25

	p	60p	
--	---	-----	--

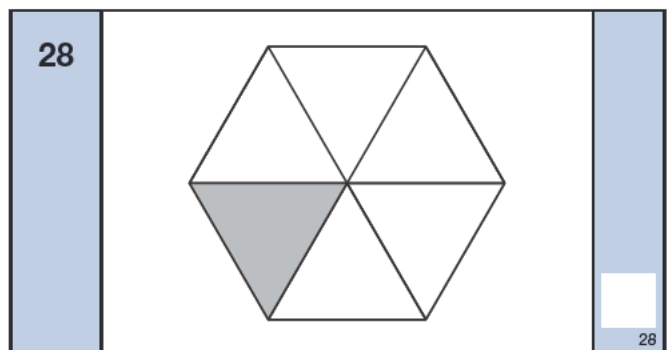
25



27

$132 \div 6 = 22$
$132 \div 3 = \square$

27



29

£	£1.45
---	-------

29

30

cm	6cm	30cm^2
----	-----	-----------------

30