

Key stage 3 mathematics 2007

Mental mathematics Test A

First name _____

Last name _____

School _____

Total marks

Time: 5 seconds continued

7		-100 -10	<input type="text"/>
---	--	----------	----------------------

8		$n(n + 3)$	<input type="text"/>
---	--	------------	----------------------

9		4^9 4^3	<input type="text"/>
---	--	-------------	----------------------

Practice question

		5	
--	--	---	--

Time: 5 seconds

1	_____ days	<input type="text"/>
---	------------	----------------------

2		8400	<input type="text"/>
---	--	------	----------------------

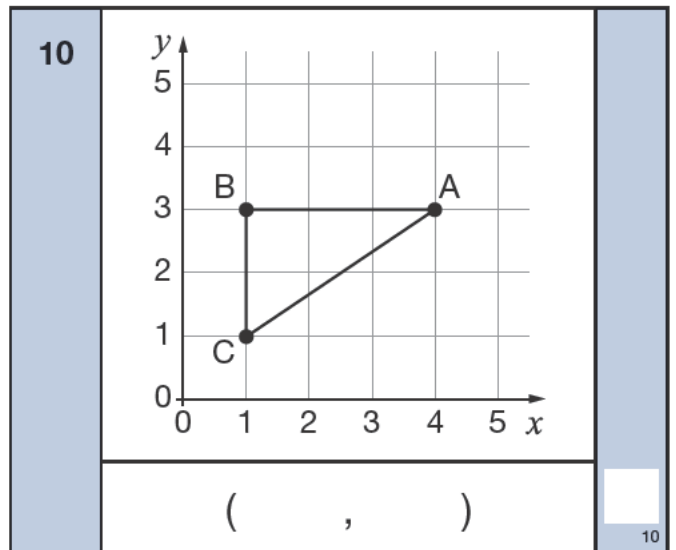
3		-4 7	<input type="text"/>
---	--	------	----------------------

4	Isosceles Scalene Equilateral Right-angled	<input type="text"/>
---	---	----------------------

5		$\frac{5}{20}$	<input type="text"/>
---	--	----------------	----------------------

6		0.348	<input type="text"/>
---	--	-------	----------------------

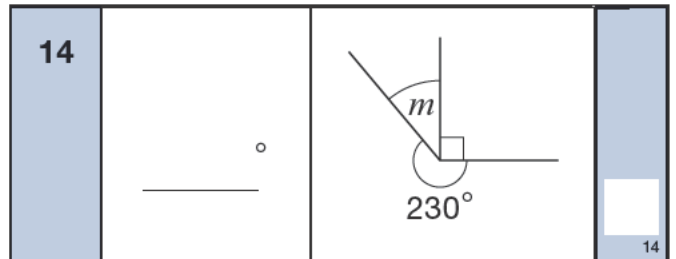
Time: 10 seconds



11	_____ pages	120	<input type="text"/>
----	-------------	-----	----------------------

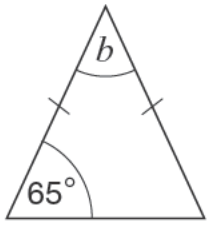
12		2092	<input type="text"/>
----	--	------	----------------------

13		80	<input type="text"/>
----	--	----	----------------------

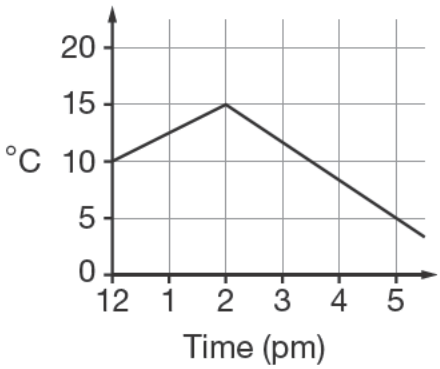


15	£	£5.99	<input type="text"/>
----	---	-------	----------------------

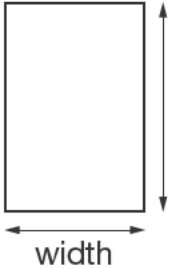
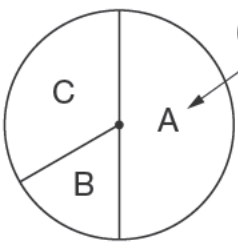
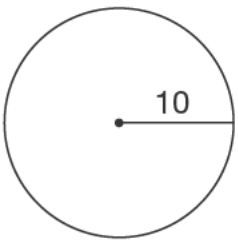
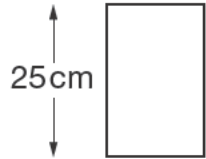
Time: 10 seconds continued

16		700	16
17	_____ °		17
18		$y = x^2 + 2$	18
19		3 : 2 50	19
20		2x 5y	20
21		$\frac{3009}{599}$	21
22		$5 < x < 9$	22
23	km	90 km/h	23

Time: 15 seconds

24		°C	24
----	---	----	----

Time: 15 seconds continued

25		cm	25
26		$b = 2a - 4$	26
27		people	27
28		10π 20π 25π 30π 100π	28
29		$\frac{5}{6}$ 20	29
30		cm	30