

Key stage 3 mathematics 2007

Mental mathematics Test C

First name _____

Last name _____

School _____

Total marks

Practice question

		195	
--	--	-----	--

Time: 5 seconds

1	£	£17.85	
---	---	--------	--

2		5 40	
---	--	------	--

3	7 5 8 4 5		
---	-----------	--	--

4			
---	--	--	--

5	cm	70mm	
---	----	------	--

6		0.1 0.2	
---	--	---------	--

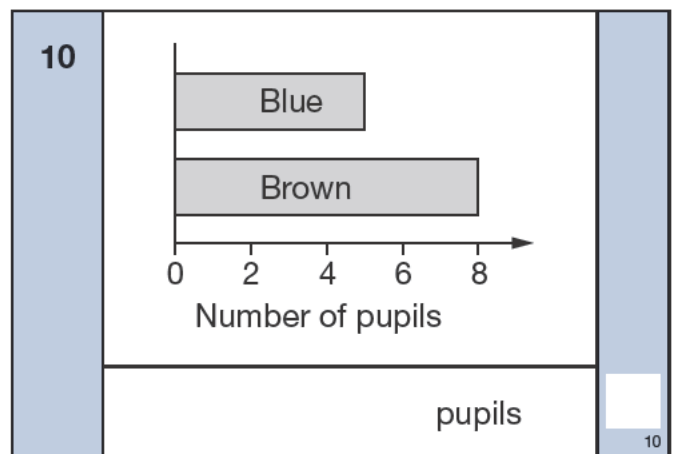
Time: 5 seconds continued

7		n	
---	--	-----	--

8		$\frac{4}{5}$	
---	--	---------------	--

Time: 10 seconds

9	40, 37, 34, _____, _____		
---	--------------------------	--	--



11			
----	--	--	--

12		North	
----	--	-------	--



13		54 66	
----	--	-------	--

14			
	cm		

15			
----	--	--	--

Time: 10 seconds continued

16

Cat	
Dog	

_____ people

16

17

_____ £7

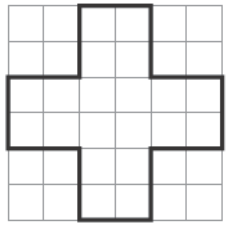
17

18

_____ $y = x - 7$

18

19



19

20

£ _____ £1.40

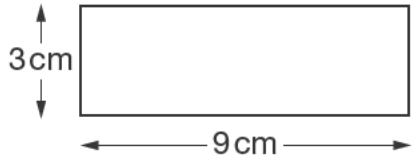
20

21

_____ °C -3°C

21

22



_____ cm²

22

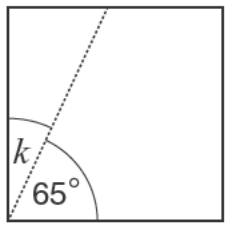
23

3 red 2 blue

23

24

_____ °



24

Time: 15 seconds

25

Notebook	£1.05
Ruler	65p
Pencil	40p

£ _____

25

26

_____ 15 24


26

27

Spring	30%
Summer	22%
Autumn	28%
Winter	%

27

28



_____ kg

28

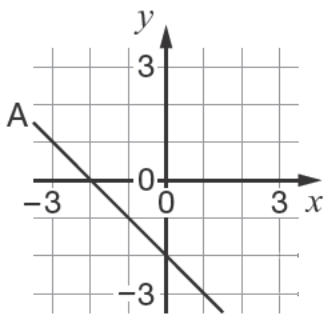
29

28 × 16 = 448

28 × 32 = _____

29

30



(_____ , _____)

30