

Key stage 3 mathematics 2009

Mental mathematics Test C

First name _____

Last name _____



School _____

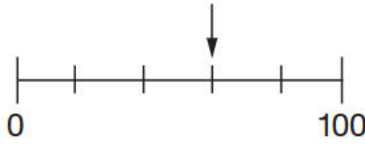
Total marks

Time: 5 seconds continued

8		-3	<input type="text"/>
---	--	----	----------------------

Time: 10 seconds

9	Silver		<input type="text"/>
	Red		
			<input type="text"/>

10		<input type="text"/>

11	6.45 pm	45 minutes	<input type="text"/>
	_____ pm		

12	2.3	2.5	2.7	<input type="text"/>
	_____, _____			

13		9343	<input type="text"/>

14	16, 12, 8, 4	<input type="text"/>
	_____, _____	

15		$a - b = 14$	<input type="text"/>

16		2.6 0.8	<input type="text"/>

Practice question

		24	
--	--	----	--

Time: 5 seconds

1		<input type="text"/>
---	--	----------------------

2	minutes	<input type="text"/>
---	---------	----------------------

3	£	£26.58	<input type="text"/>
---	---	--------	----------------------

4		63	<input type="text"/>
---	--	----	----------------------

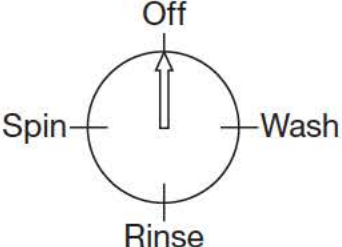
5		206	<input type="text"/>
---	--	-----	----------------------

6		<input type="text"/>
---	--	----------------------

7		b	<input type="text"/>
---	--	-----	----------------------

Time: 10 seconds continued

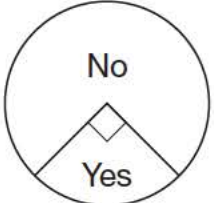
17



Off
Spin Wash
Rinse

17

18



No
Yes

people

18

19

$8pq$

19

20

cm 8cm

20

21

£ £50

21

Time: 15 seconds

22

in \rightarrow $\times 4$ \rightarrow $+ 6$ \rightarrow out

22

23

2009

23

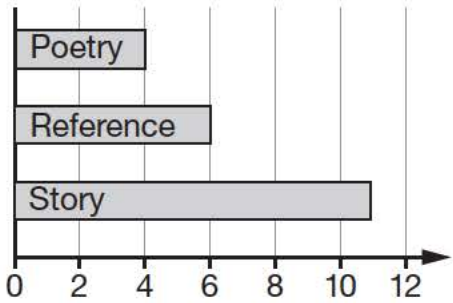
24

magazines	25%
food	40%
clothes	
	%

24

Time: 15 seconds continued

25

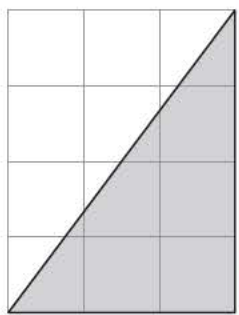


Poetry	4
Reference	6
Story	11

25


26

_____ cm²



26

27



27

28

rectangle rhombus
parallelogram
square trapezium

28

29

$4.3 \times 6 = 25.8$

29

30

21 23 25 27

30