

# Year 4 mental mathematics test

Name ..... Class .....

School .....

Total marks

Time: 5 seconds continued





4		45	<input type="text"/>
---	--	----	----------------------

Practice question

--	--

5			<input type="text"/>
---	--	--	----------------------

Time: 5 seconds

1	 
	 
	p

6	minutes		<input type="text"/>
---	---------	--	----------------------

7		60 5	<input type="text"/>
---	--	------	----------------------

8		8.4	<input type="text"/>
---	--	-----	----------------------

2		<input type="text"/>
---	--	----------------------

9	m		<input type="text"/>
---	---	--	----------------------

3		<input type="text"/>
---	--	----------------------

10		13	<input type="text"/>
----	--	----	----------------------

Time: 10 seconds

11		9 6 5	<input type="text"/>
----	--	-------	----------------------

12	pentagon	square	<input type="text"/>
	rectangle		
	hexagon	octagon	

13		18 5	<input type="text"/>
----	--	------	----------------------

14	£	75p	<input type="text"/>
----	---	-----	----------------------

15	<input type="text"/>		<input type="text"/>
----	----------------------	--	----------------------

16		180	<input type="text"/>
----	--	-----	----------------------

17		9	<input type="text"/>
----	--	---	----------------------

18		33	<input type="text"/>
----	--	----	----------------------

19	22	32	42	<input type="text"/>
	52	62		

20	$\begin{array}{c} \underline{3} \\ \square \end{array}$		<input type="text"/>
----	---	--	----------------------