

Year 7 mathematics test 2003

Mental mathematics

First name _____

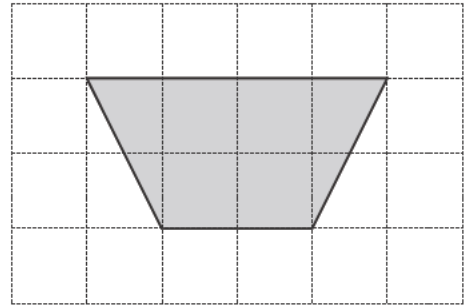
Last name _____

School _____

Total marks

Time: 10 seconds

6



6

7

16

7

8

packs

18

8

9

.....

9

10

pm

4:30pm

10

11

5

11

Practice question

60

Time: 5 seconds

1

65 25

1

2

2

3

3

4

4

5

9

5

12



%

12

13

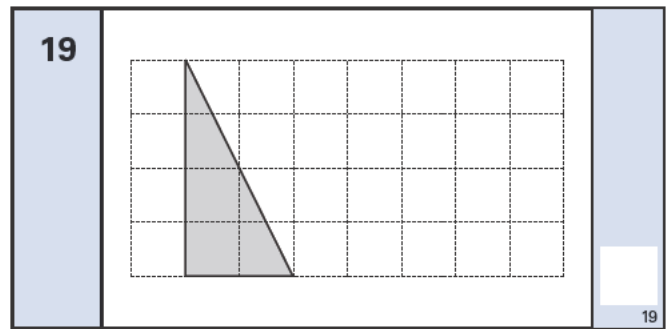
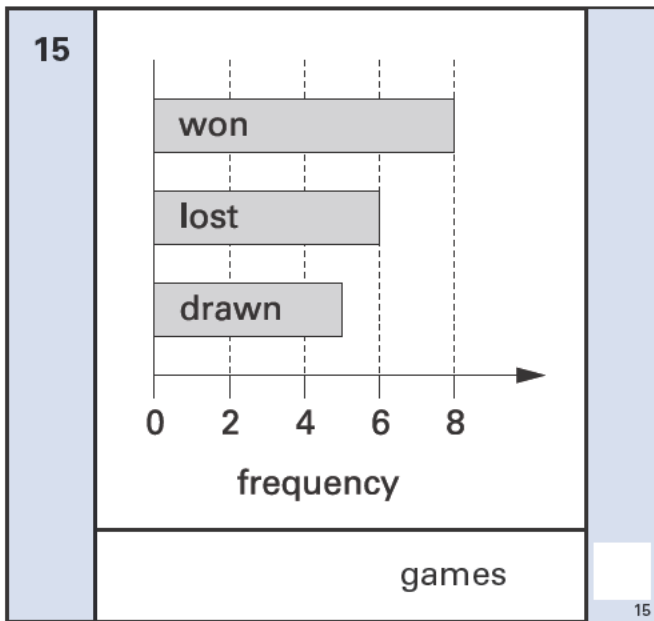
40

13

14

14

Time: 15 seconds



20

1, 3, 9,,

20

