

Year 7 mathematics test 2003

Mental mathematics

First name _____

Last name _____

School _____

Total marks

Practice question

		60	
--	--	----	--

Time: 5 seconds

1		65 25	<input type="text"/>
---	--	-------	----------------------

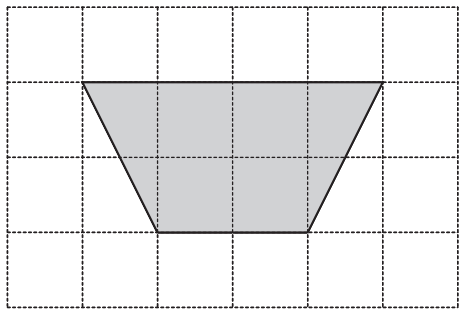
2			<input type="text"/>
---	--	--	----------------------

3			<input type="text"/>
---	--	--	----------------------

4			<input type="text"/>
---	--	--	----------------------

5		9	<input type="text"/>
---	--	---	----------------------

Time: 10 seconds

6		<input type="text"/>
---	--	----------------------

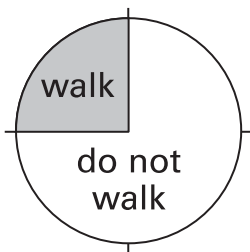
7		16	<input type="text"/>
---	--	----	----------------------

8	packs	18	<input type="text"/>
---	-------	----	----------------------

9		<input type="text"/>
---	-------	--	----------------------

10	pm	4:30pm	<input type="text"/>
----	----	--------	----------------------

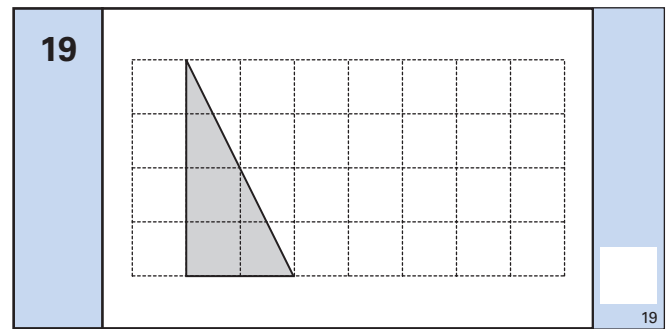
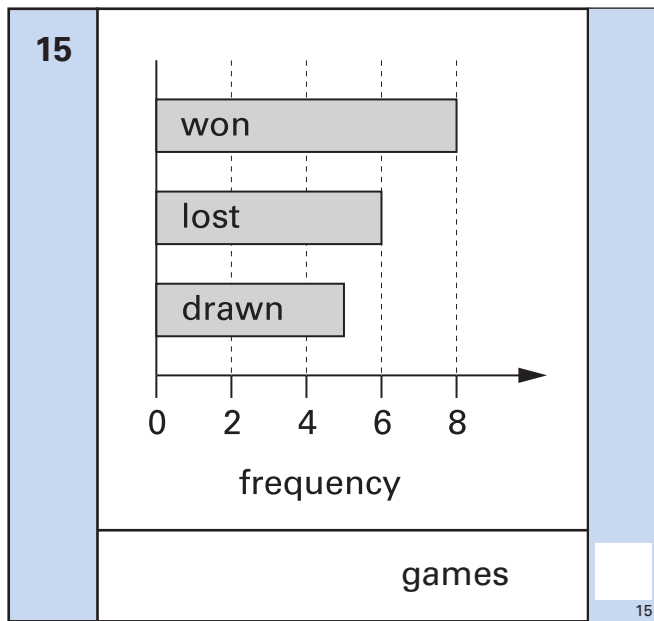
11		5	<input type="text"/>
----	--	---	----------------------

12		<input type="text"/>
		%

13		40	<input type="text"/>
----	--	----	----------------------

14			<input type="text"/>
----	--	--	----------------------

Time: 15 seconds



20 1, 3, 9,,

20

