

Year 7 mathematics 2005

Mental mathematics test

First name \_\_\_\_\_

Last name \_\_\_\_\_

School \_\_\_\_\_

Total marks

Time: 10 seconds

6

April

Mon		4	11	18	25
Tue		5	12	19	26
Wed		6	13	20	27
Thu		7	14	21	28
Fri	1	8	15	22	29
Sat	2	9	16	23	30
Sun	3	10	17	24	

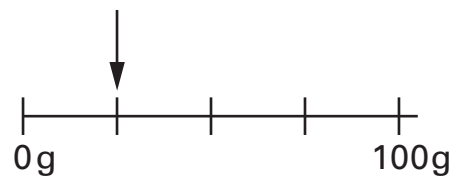
6

7

24

7

8



g

8

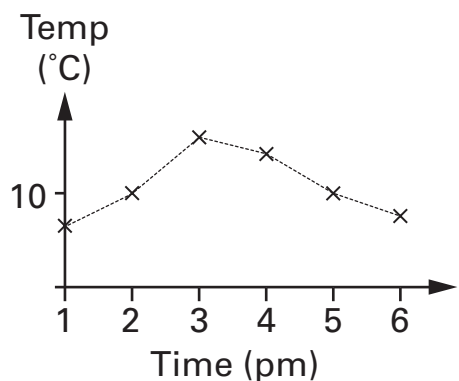
9



cm

9

10



pm

10

Practice question

95

Time: 5 seconds

1

19 13

1

2

17

2

3

3

4

50% 60

4


5

400

5

Time: 10 seconds continued

11		$6 \times 5 - 7$	<input type="text"/>
----	--	------------------	----------------------

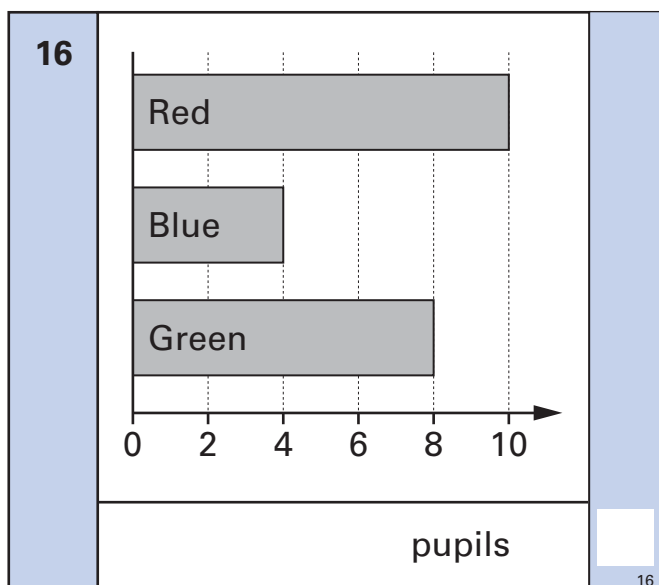
12		250ml	<input type="text"/>
		ml	<input type="text"/>

13		$^{\circ}\text{C}$	$-8^{\circ}\text{C}$	<input type="text"/>
----	--	--------------------	----------------------	----------------------

14		36	<input type="text"/>
----	--	----	----------------------

15		$4y = 44$	<input type="text"/>
----	--	-----------	----------------------

Time: 15 seconds

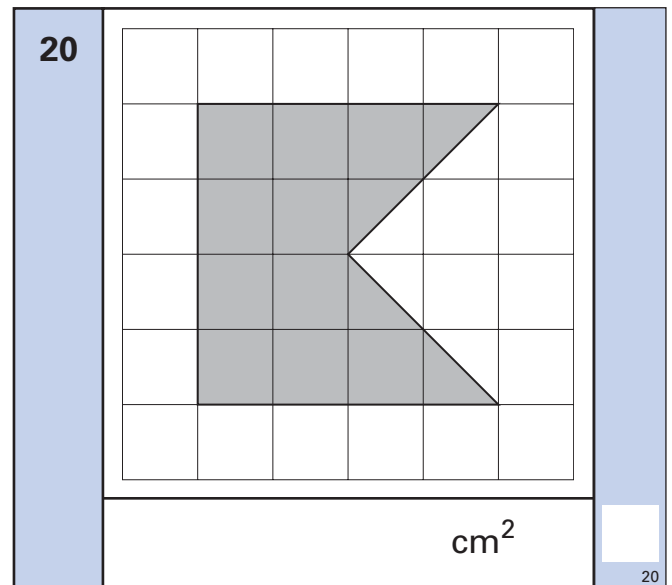
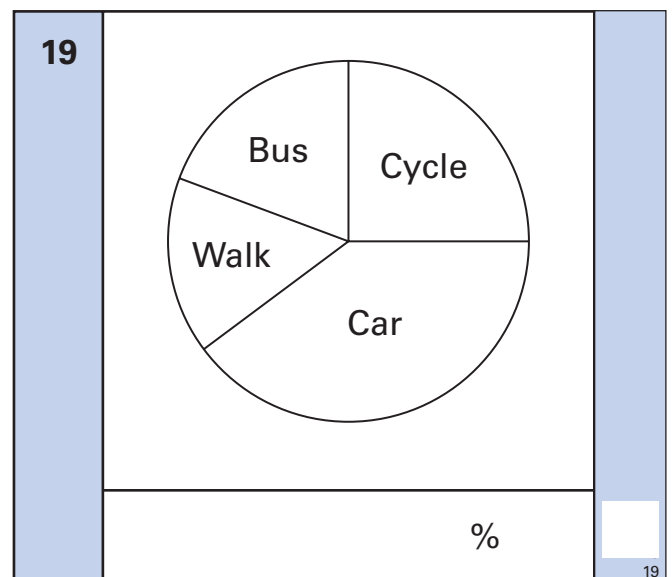


Sourced from SATs-Papers.co.uk

Time: 15 seconds continued

17	<table border="1"> <tr> <td>Pen</td> <td>30p</td> </tr> <tr> <td>Pencil</td> <td>25p</td> </tr> </table>	Pen	30p	Pencil	25p	<input type="text"/>
Pen	30p					
Pencil	25p					
	£	<input type="text"/>				

18	33, 29, 25, 21, ..., ...	<input type="text"/>
		<input type="text"/>



<https://www.SATs-Papers.co.uk>