

Year 7 mathematics 2007

Mental mathematics test

First name _____

Last name _____

School _____

Total marks

Time: 10 seconds

7

	Blue eyes	Green eyes
Blonde hair	Jack	Molly
Brown hair	Raj	Ali

7

Practice question

		29	
--	--	----	--

8

	70	90	30	<input type="text"/>
--	----	----	----	----------------------

8

Time: 5 seconds

1

		<input type="text"/>
--	--	----------------------

1

2

		<input type="text"/>
--	--	----------------------

2

3

	19	41	<input type="text"/>
--	----	----	----------------------

3

4

	$15 - n = 6$	<input type="text"/>
--	--------------	----------------------

4

5

	mm	6cm	<input type="text"/>
--	----	-----	----------------------

5

6


	8	7	<input type="text"/>
--	---	---	----------------------

6

9

9

10

 = 4 people

28 people

circles

10

Time: 10 seconds continued

11	%	35%	25%	<input type="text"/> <small>11</small>
-----------	---	-----	-----	---

12	3608, 3708, 3808, ...	<input type="text"/> <small>12</small>
_____ , _____		

13	3	1	5	1	<input type="text"/> <small>13</small>
7 3 1					

14		20	32	<input type="text"/> <small>14</small>
-----------	--	----	----	---

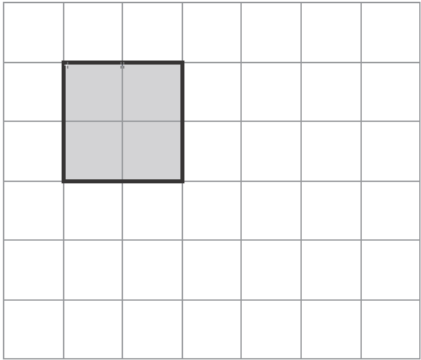
Time: 15 seconds

15		5×7	9	<input type="text"/> <small>15</small>
-----------	--	--------------	---	---

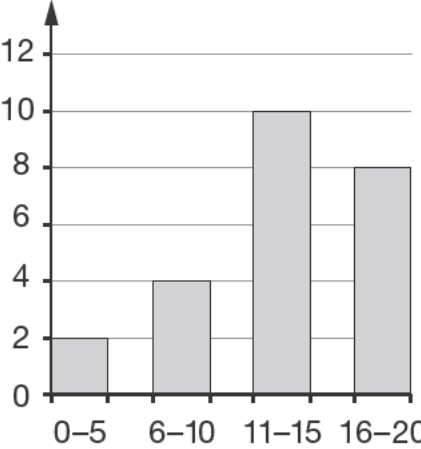
16		10th	19th	<input type="text"/> <small>16</small>
-----------	--	------	------	---

17	£	80p	£5	<input type="text"/> <small>17</small>
-----------	---	-----	----	---

Time: 15 seconds continued

18		<input type="text"/> <small>18</small>
-----------	--	---

19	pm	2:00pm	<input type="text"/> <small>19</small>
-----------	----	--------	---

20	<p>Number of pupils</p>  <p style="text-align: center;">Number of marks</p>	<input type="text"/> <small>20</small>
pupils		