

Year 9 mathematics

Mental mathematics Lower tier test

First name _____

Last name _____

Class _____

Date _____

Total marks

Practice question

		29	
--	--	----	--

Time: 5 seconds

1	£	£6.53	<input type="text"/>
----------	---	-------	----------------------

2		38 19	<input type="text"/>
----------	--	-------	----------------------

3		9	<input type="text"/>
----------	--	---	----------------------

4			<input type="text"/>
----------	--	--	----------------------

5		ml	<input type="text"/>
----------	--	----	----------------------

6		-2	<input type="text"/>
----------	--	----	----------------------


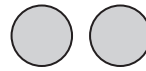
7		42.6	<input type="text"/>
----------	--	------	----------------------

Time: 5 seconds continued

8		36	<input type="text"/>
----------	--	----	----------------------

9			<input type="text"/>
----------	--	--	----------------------

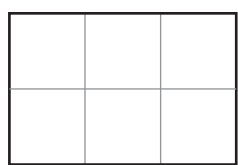
Time: 10 seconds

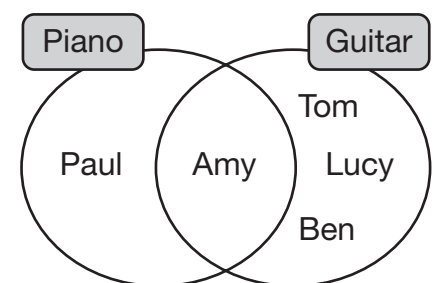
10	Yes		
	No		
pupils			<input type="text"/>

11	41, _____, _____	<input type="text"/>
-----------	------------------	----------------------

12	£	£1.49	<input type="text"/>
-----------	---	-------	----------------------

13	pm	2.55pm	<input type="text"/>
-----------	----	--------	----------------------

14		<input type="text"/>
-----------	---	----------------------

15		

Time: 10 seconds continued

16		127	<input type="text"/>
-----------	--	-----	----------------------

17		$m + n = 30$	<input type="text"/>
-----------	--	--------------	----------------------

18	£	£50	<input type="text"/>
-----------	---	-----	----------------------

19	cm	<input type="text"/>
-----------	----	----------------------

20		<input type="text"/>
-----------	--	----------------------

21		<input type="text"/>
	pupils	

22		<input type="text"/>
	euros	

Time: 10 seconds continued

23		<input type="text"/>
-----------	--	----------------------

24		$6k - 2$	<input type="text"/>
-----------	--	----------	----------------------

Time: 15 seconds

25		<input type="text"/>
-----------	--	----------------------

26		5 4	<input type="text"/>
-----------	--	-----	----------------------

27		£6.40 20p	<input type="text"/>
-----------	--	-----------	----------------------

28		<input type="text"/>
-----------	--	----------------------

29		$\frac{3}{4}$ $1\frac{1}{2}$	<input type="text"/>
-----------	--	------------------------------	----------------------

30		<input type="text"/>
	cm ²	