

Summer Progress check

# Year 1

## Mathematics

### Paper 2: reasoning and problem solving

First name						
Middle name						
Last name						
Date of birth	Day		Month		Year	
Teacher						

These assessments have been designed by White Rose Maths.  
For more information, please visit [www.whiterosemaths.com](http://www.whiterosemaths.com)

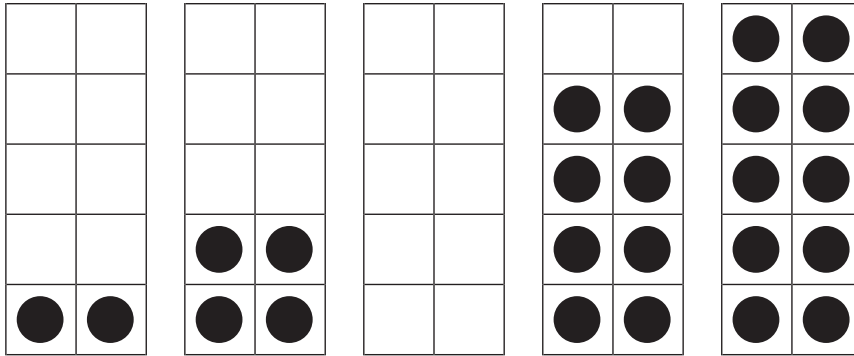


**[BLANK PAGE]**

Please do not write on this page.

1

Draw counters to complete the number pattern.



1 mark

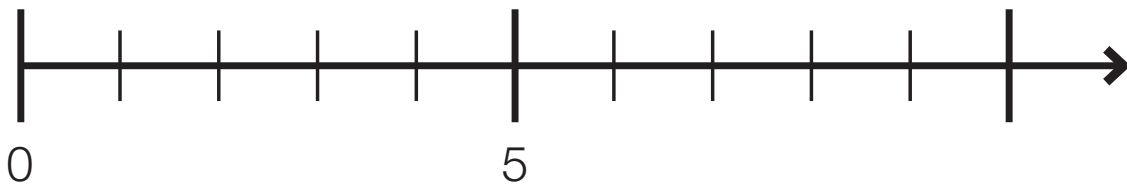
2

Write the numbers in the correct place on the number line.

9

3

6



2 marks

3

Kat makes a number on the bead string.



What is one **more** than Kat's number?



1 mark

Complete the sentence.

18 is one more than

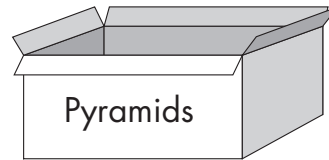
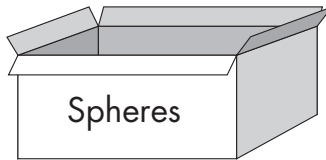
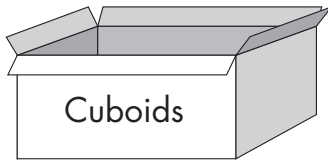

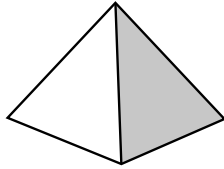
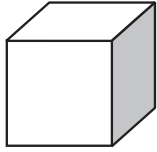


1 mark

4

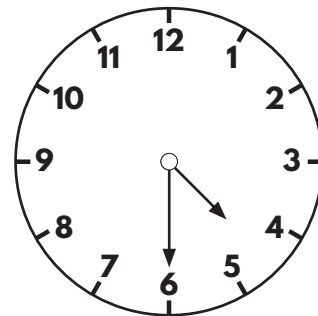
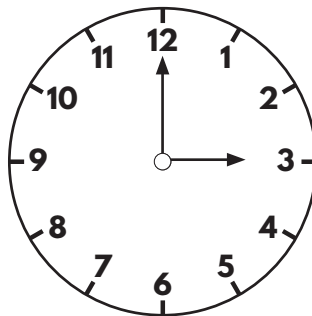
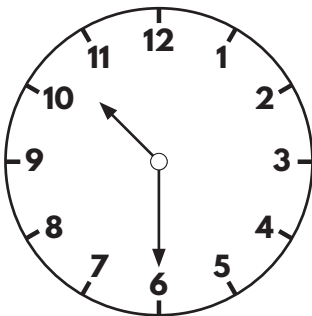
Andy is tidying away some 3D shapes.

Draw lines to show which box each shape should be put in.



5

Draw lines to match the clocks to the correct times.



half past 4

half past 10

3 o'clock




2 marks



1 mark

6

Complete the sentences.



The tallest flower is



1 mark

is shorter than

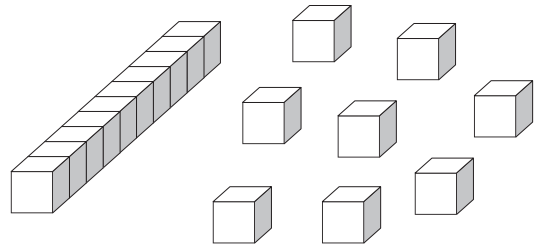
1 mark

7

Draw counters on the ten frame to make the statement correct.



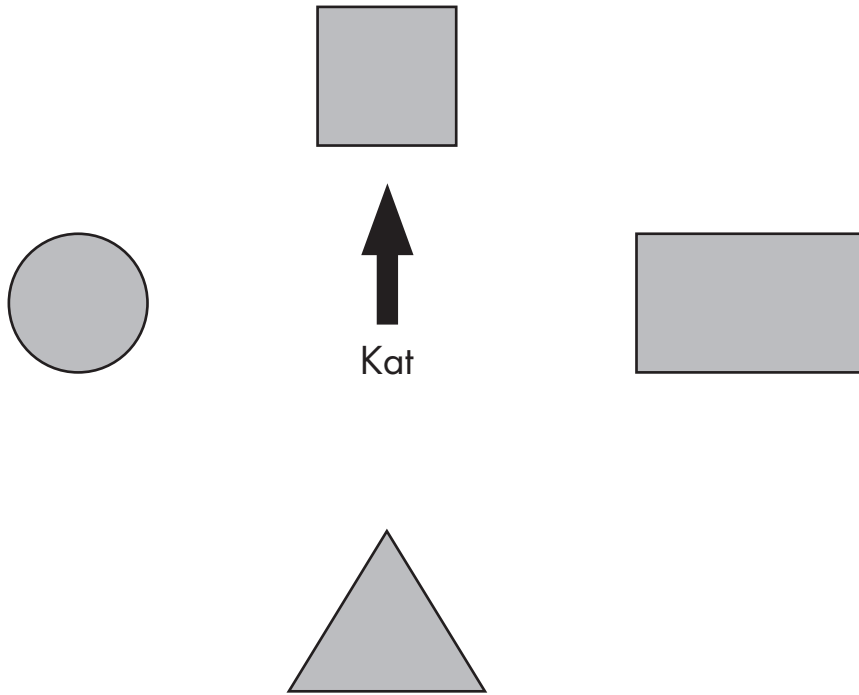
=



1 mark

8

Kat is facing the square.



She makes a half turn.

Write down the name of the shape she is facing now.



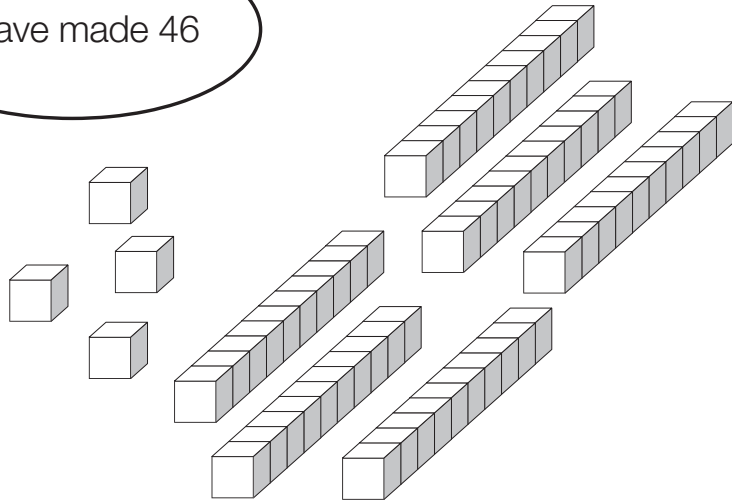
1 mark



9



I have made 46



Andy is **wrong**.

What number has Andy made?




1 mark

10

Apples come in bags of 5

Kat buys 7 bags.



How many apples does Kat buy altogether?



1 mark

11

Faye has these coins.

She gives the 20p coin to Andy.

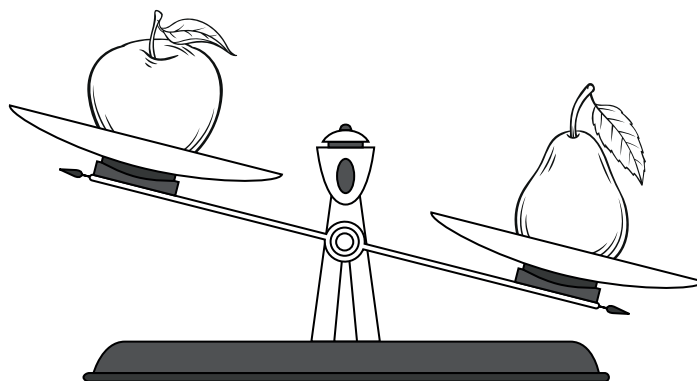

Circle the coin she gives to Andy.



1 mark

12

Faye is weighing pieces of fruit.




Choose the correct word to complete the sentence.

heavier

lighter

The apple is \_\_\_\_\_ than the banana.

Circle the heaviest piece of fruit.



1 mark



1 mark

13

Here is a shape.



What fraction of the shape is shaded?

\_\_\_\_\_



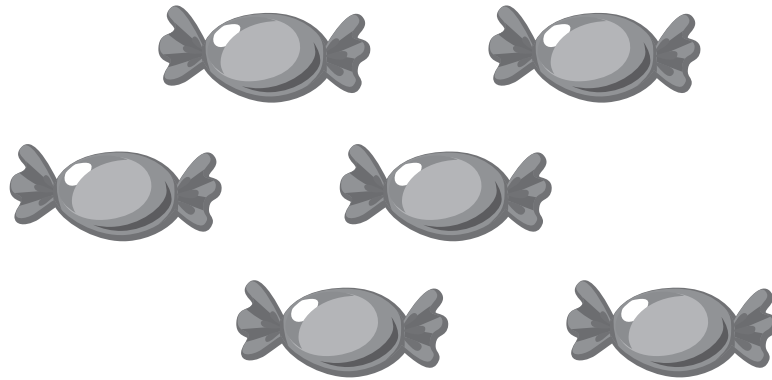
1 mark

14

There are 18 sweets in a jar.

Andy eats some sweets.

He has these sweets left.



How many sweets did Andy eat?

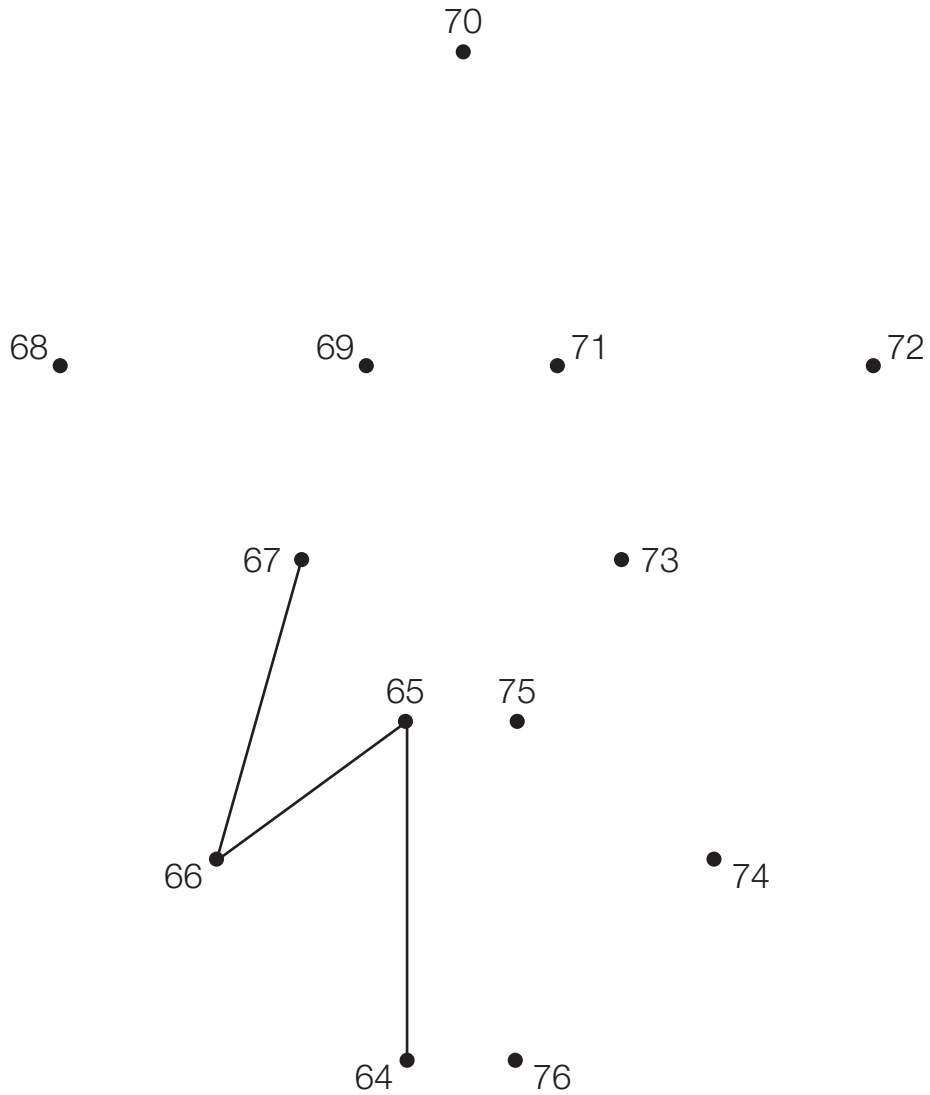


1 mark

15

Join the dots in the correct order.

Some have been done for you.



1 mark

END OF TEST

**[BLANK PAGE]**

Please do not write on this page.

**[BLANK PAGE]**

Please do not write on this page.